

नामः

कक्षा - छठी  
विषय - हिन्दी

शीट नं०:

अभ्यास पत्रिका - 3

1) प्रश्नों के उत्तर एक वाक्य में दीजिए :-

1) भाषा किसे कहते हैं?

2) भाषा के प्रकार लिखिए।

3) हमारी मातृभाषा कौन-सी है?

2) वाक्यों में सजा शब्द भरें :-

1) \_\_\_\_\_ आँकता है।

2) वह \_\_\_\_\_ पढ़ रहा है।

3) मैं कल \_\_\_\_\_ के घर गया था।

4) \_\_\_\_\_ करना बुरी बात है।

3) वचन बदलो :-

1) तितली -

3) घोड़ा -

2) माला -

4) लकड़ी -

4) सर्वनाम शब्द पर रेखा खींचो :-

- 1) वह स्कूल जाता है।
- 2) राम उसका मित्र है।
- 3) दरवाजे पर कोई खड़ा है।
- 4) जिसकी लाठी, उसकी भैंस।
- 5) तुम कल कहाँ गए थे?

5) पञ्चमिषुवतुी शब्द लिखो :-

- |         |          |
|---------|----------|
| 1) आग   | 4) पत्ता |
| 2) पानी | 5) कपड़ा |
| 3) मोर  | 6) जंगल  |

6) काल के नाम बताओ :-

- 1) मैं कल दिल्ली गया था।
- 2) मोहन पढ़ रहा है।
- 3) माता खाना बना रही।

CHANDER BHAN MEMORIAL PUBLIC SCHOOL  
WORKSHEET FOR CLASS - VI  
SUB ⇒ ENGLISH

- Q1. Underline the nouns in these sentences and state whether they are common, proper or abstract.
1. Reetika's father has bought a beautiful cottage in Shimla.
  2. The boy burnt his fingers while bursting firecrackers.
  3. Determination and positive thoughts will help you overcome the fear of failure.
  4. All the clothes in this store are made of hand-spun cotton.
  5. We offered a glass of water to the postman who came to deliver the letters.

Q2. Now, circle the possessive nouns in the above exercise.

Q3. Fill in the blanks with the correct collective nouns from the box.

Pride	gang	flock	litter	band	bunch	fleet
range	school	crew	stack			

1. My neighbour's dog has given birth to a \_\_\_\_\_ of puppies.
2. We spotted a \_\_\_\_\_ of dolphins in the ocean.
3. Someone has left behind a \_\_\_\_\_ of yellow lilies on our doorstep.
4. My brother spotted a \_\_\_\_\_ of ships near the horizon.
5. We left the \_\_\_\_\_ of snow-capped mountains behind and headed towards the city.

6. We passed a \_\_\_\_\_ of lions sitting under a tree during the jungle safari.
7. The \_\_\_\_\_ of colourful birds flew away into the evening sky.
8. We donated a \_\_\_\_\_ of second-hand books to a library for underprivileged children.
9. The \_\_\_\_\_ on the aircraft showed great presence of mind when a passenger fell ill.
10. The \_\_\_\_\_ of musicians entertained the guests throughout the wedding ceremony.
11. If you keep the main door of the house open, a \_\_\_\_\_ of thieves might enter some day.

Q4. Fill in the blanks with suitable pronouns.

1. Is she a cousin of \_\_\_\_\_?
2. \_\_\_\_\_ was following me? Did you see the person?
3. \_\_\_\_\_ is the website I was talking about.
4. \_\_\_\_\_ should join a theatre workshop to get over your stage fright.
5. The child is throwing a tantrum because \_\_\_\_\_ does not want to eat home cooked food.

Q5. Jitender, a student of class - VI, has lost his English book in school playground. He decides to put up a notice on the students' notice board of his school. Write the notice in about 50 words and put it in a box.

CHANDER BHAN MEMORIAL PUBLIC SCHOOL  
MATHS WORKSHEET

NAME-

CLASS - VI

ROLL NO. -

Ques 1 What are the factors of i) 12 ii) 36

Ques 2 Write in expanded form:-

i) 75,06,080

ii) 3,12,45,678

Ques 3 Find the difference between the place value and face value of the digit 9 in 459326.

Ques 4 Simplify

i)  $24 + 33 \div (34 - 23)$

ii)  $40 \times 10 \div 5 + 20$

Ques 5 Find the successor and predecessor of 8999.

Ques 6 Construct an angle  $90^\circ$  using compass.

Ques 7 How many lines can be drawn passing through:- a) one point b) two given points?

Ques 8 Fill in the blanks.

i) In a square, \_\_\_\_\_ angles are equal and \_\_\_\_\_ sides are equal.

ii) The Rhombus has \_\_\_\_\_ pairs of parallel sides.


iii) The diagonals of a rhombus bisect each other at \_\_\_\_\_.

iv) A five sided polygon is called as \_\_\_\_\_.


v) The perimeter of rectangle is \_\_\_\_\_.

Q49 Draw symmetrical figures with the given line / line of symmetry  $l$  and  $m$ .

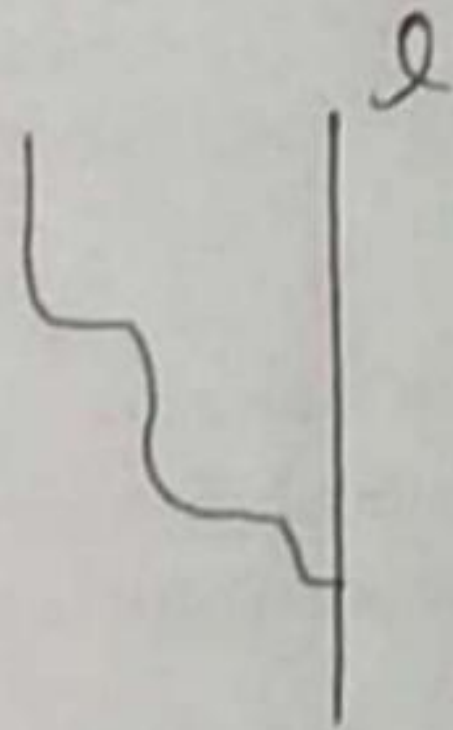
i)



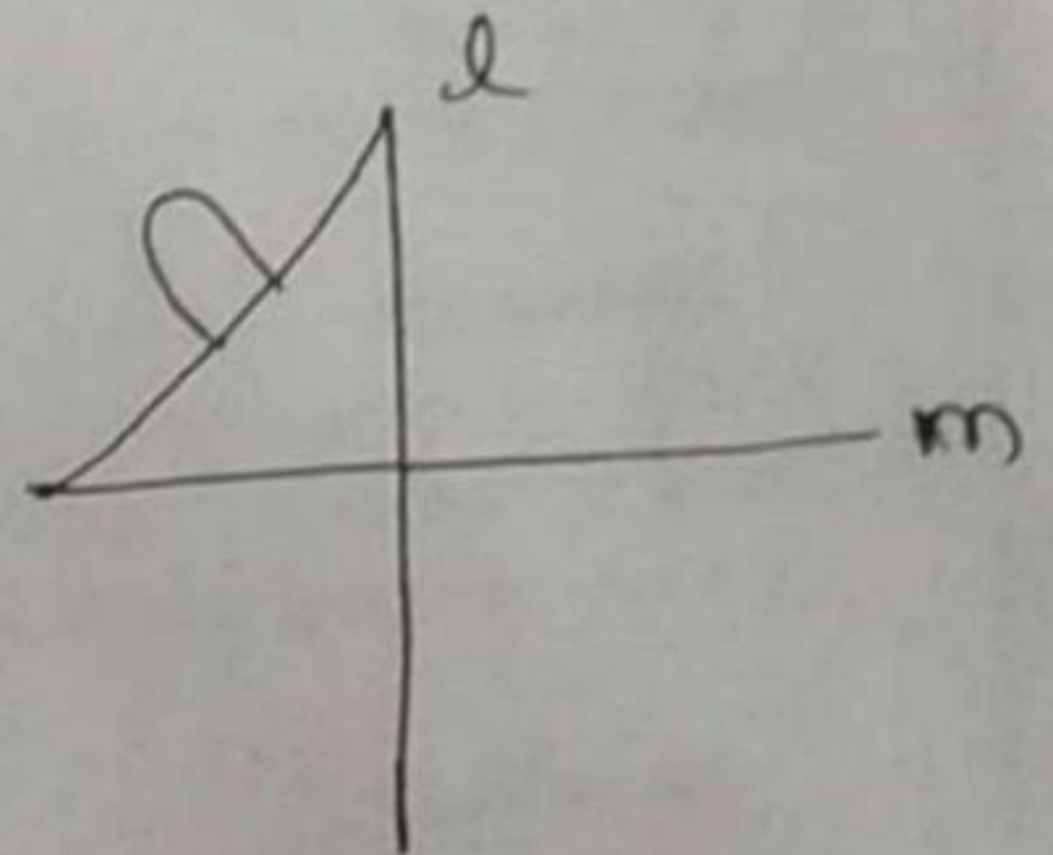
iii)



ii)



iv)



CHANDER BHAN MEMORIAL PUBLIC SCHOOL  
SCIENCE WORKSHEET  
CLASS -6

**Ques -1 Tick the correct option**

1)The bones forming the backbone are called

- a)ribs
- b)vertebrae
- c)femur

2)Blood vessels are produced in the

- a)heart
- b)blood vessel
- c) bone marrow

3)The coloured part of the eye is

- a)cornea
- b)iris
- c)retina

4)The hip and shoulder joints are example of

- a)hinge joint
- b)gliding joint
- c)ball and socket joint

5) muscles are attached to the bones by tissues called

- a)tendon
- b)girdle
- c)joint

**Ques-2 Match the following**

a)Cerebrum	i)controls the reflex action
b)Spinal cord	ii)has many nerve endings
c)cerebellum	iii)controls our sense organs

CHANDER BHAN MEMORIAL PUBLIC SCHOOL  
SCIENCE WORKSHEET  
CLASS -6

d)medulla	iv)controls movement and balance
e)skin	v)controls our involuntary activities

**Ques -3 Fill in the blanks**

Water,carbondioxide, naphthelene balls,  
solar energy,CNG

- 1) When coal is burnt in air\_\_\_\_\_ is formed.
- 2) \_\_\_\_\_ is a natural resource.
- 3)\_\_\_\_\_ is obtained from coal tar.
- 4) \_\_\_\_\_ is a less polluting fuel.
- 5)\_\_\_\_\_ is a renewable source of energy

**Ques -4** rearrange the following name of the planets

- a) SAMR
- b) TSANRU
- c) HTERA
- d) USVEN
- e) ECRUMYR

**Ques -4** Draw skeleton of human beings in your note book



CHANDER BHAN MEMORIAL PUBLIC SCHOOL  
CLASS - VI

WORKSHEET - HISTORY  
SUBJECT - S.St.

Q1 Choose the best alternative answer

1. Mehrgarh is in -

- (i) Jammu and Kashmir
- (ii) Assam
- (iii) Pakistan

2. The first animal to be domesticated -

- (i) Dog
- (ii) Sheep
- (iii) Cow

3. Theocracy is a form of government run by -

- (i) Kings and monarchs
- (ii) Religious leaders
- (iii) Army and generals.

4. Lothal is situated in -

- (i) Manipur
- (ii) Gujarat
- (iii) Punjab

5. What is sickle?

- (i) A tool
- (ii) A painting
- (iii) A cartoon


Q2

Fill in the blanks

1. The burial places with huge rectangular blocks of stones called \_\_\_\_\_.
2. In some places like Burzahom, people lived in deep \_\_\_\_\_ that had steps leading into them.
3. \_\_\_\_\_ is a small needle like tool to weave cotton.
4. Human settlements started to establish during \_\_\_\_\_ age.
5. Babylonia became an international \_\_\_\_\_ in ancient times.

Q3

The stone age was divided into three periods. Name them.

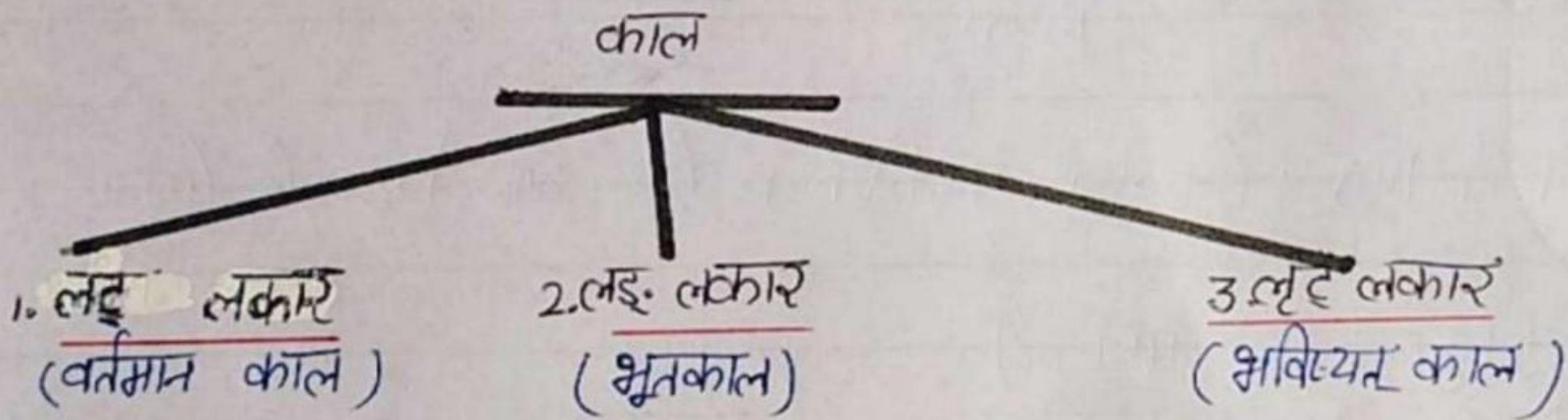


चन्द्रमान मैमोरियल पब्लिक स्कूल  
 प्रथम सत्र अभ्यास पत्रिका (3)  
 कक्षा - छठी ; विषय संस्कृत

नाम -  
 रोल नं -

जिस शब्द से किसी कार्य के करने या होने का बोध हो, उसे 'क्रिया' कहते हैं। जैसे :- पढ़ना, हँसना, खाना, जाना आदि। संस्कृत में इन्हें धातु कहते हैं। जैसे - पठ्, हस, खाद्, गम् आदि।

**काल** - जिस समय में क्रिया की जाती है उसे काल कहते हैं। काल तीन होते हैं :-



वर्तमान काल (लट् लकार) की क्रियाएँ बनाने के लिए धातु के साथ निम्नलिखित प्रत्यय जोड़े जाते हैं :-

**प्रश्न :- 1 = तालिका याद करो :-**

पठ् - पढ़ना वर्तमान काल लट् लकार

पुरुष	स्क्वचनम्	द्विवचनम्	बहुवचनम्
प्रथम पु०	पठ्+अति = पठति	पठ्+अतः = पठतः	पठ्+अन्ति = पठन्ति
मध्यम पु०	पठ्+असि = पठसि	पठ्+अथः = पठथः	पठ्+अथ = पठथ
उत्तम पु०	पठ्+आमि = पठामि	पठ्+आवः = पठावः	पठ्+आमः = पठामः

इसी प्रकार अन्य धातु भी समान रूप से चलते हैं।

B612

प्रश्न:- 2- धातुओं के अर्थ याद करो व तालिका पूरी करो :- (अपरिवर्तनीय)

धातु	अर्थ	स्कन्ध	द्विक्रम	बहुवचन
(i) हस	हँसना	हसति		हसन्ति
(ii) पठ	गिना	पठामि		
(iii) धाव	दौड़ना		धावथः	
(iv) लिख	लिखना			लिखथ
(v) वद	बोलना	वदति		
(vi) चल	चलना		चलावः	
(vii) पच	पकाना	पचसि		
(viii) भ्रम	धूमना	भ्रमति		
(ix) नम	नमस्ते करना			नमामः
(x) कूज	कूजना		कूजतः	

प्रश्न:- 3- धातुओं के अर्थ याद करो व तालिका पूरी करो :- (परिवर्तनीय)

धातु	अर्थ	स्कन्ध	द्विक्रम	बहुवचन
(i) गम (गाच्छ)	जाना			गच्छन्ति
(ii) गी (गाय)	गाना	गायसि		
(iii) नृत (नृत्य)	नाचना		नृत्यावः	
(iv) नी (नय)	लाना	नयति		
(v) पी (पिब)	पीना		पिबथः	
(vi) दृश् (पश्य)	देखना			पश्यामः
(vii) वृ (वृत्)	तेरना			तरथ
(viii) ध्रा (जिघ्र)	सूचना	जिघ्रति		
(ix) स्मृ (स्मर)	याद करना	स्मरसि		
(x) स्था (तिष्ठ)	बैठना / खड़ा होना			तिष्ठामः
(xi) कृ	करना	करोति	कुरुतः	कुर्वन्ति

CHANDER BHAN MEMORIAL PUBLIC SCHOOL

CLASS - VI<sup>th</sup>

Name :-

SUBJECT - COMPUTER

Roll no :-

WORKSHEET - 3

Q1 what is algorithms?

Q2 what is flowchart?

Q3 what is programming language?

Q4 Define the following terms :-

(i) Flow lines :-

(ii) Output box :-

(iii) Process Box :-

(iv) Decision Box :-

(v) Connectors :-

Q5 what is chatting?