

NAME: CHANDER BHAN MEMORIAL PUBLIC SCHOOL

Roll No: V CLASS

DELTA

DATE: ENGLISH PRACTICE WORKSHEET

Ques: Write an essay on Water conservation

Ques: Write the hindi and english meaning of the following:

- 1. Bits →
- 2. Empty →
- 3. Innocent →
- 4. Huge →


Ques: Write the synonym of the following:

- 1. Accuse →
- 2. Penalty →
- 3. Bear →
- 4. Wise →
- 5. Beautiful →

Ques 4 Do as directed:-

1. The boys sit _____ the tree (preposition)
2. _____ is a girl (pronoun)
3. Ram is _____ boy in the class (correct degree of adjective)
4. Quick _____ (change into adverb)

Ques 5 Complete the table given below:-




Ques 6 Rearrange the words in jumble order to make meaningful sentences.

1. have / been working / at a book stall / they.

2. God / pray to / I / morning / every.

नाम: — चन्द्र भानु मेमोरियल पब्लिक स्कूल
 शैल नं० — कक्षा - पांचवीं
 दिनांक: — हिन्दी अभ्यास पुस्तिका



प्र०२ निवांच लिखो → मित्रता

प्र०२ शब्दांश

- | | |
|----------------------|-------------------|
| १. कठिन → _____ | २. सुगंध → _____ |
| ३. प्रतीक्षा → _____ | ४. पुस्तक → _____ |
| ५. मोक्ष → _____ | ६. स्वर्ण → _____ |

प्र०३ मय्यायवाची

- | | |
|------------------|---|
| १. चाँद → _____ | , |
| २. रात → _____ | , |
| ३. पुष्प → _____ | , |
| ४. नदी → _____ | , |
| ५. माँ → _____ | , |

प्र० 4 मुहावरों के अर्थ लिखकर वाक्य बनाओ -

1. अंधों में जाना राजा → _____

वाक्य _____

2. अपने पाँव पर कुल्हाड़ी मारना → _____

वाक्य _____

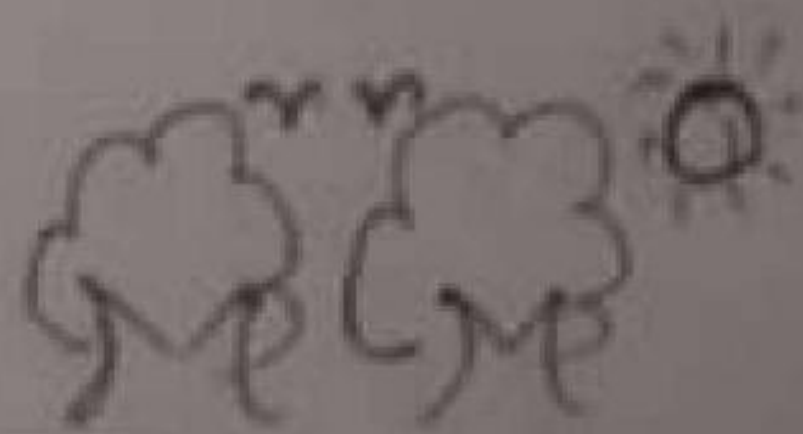
प्र० 5 भिन्न करो →

1. मोटा	शाप
2. धर्म	निंदा
3. कदवान	पतला
4. लशंसा	असत्य
5. सत्य	अधर्म

प्र० 6 विराम चिह्नों का प्रयोग करो →

1. मेरा नाम राधा है
2. डॉ. महेगा मंदिर के पास वाले घर में रहते हैं
3. माँ ने कहा तुम कहां जा रहे हो

प्र० 7 चित्र वर्णन करो -



NAME -

CHANDER BHAN MEMORIAL PUBLIC SCHOOL

R. No -

CLASS - V

DATE -

MATHS PRACTICE WORKSHEET

Ques-1 Fill in the blanks:-

- (i) If we divide a number by the number itself, the quotient is _____
- (ii) The Smallest 4 digit number using 5, 1, 2, 8 = _____
- (iii) $33.564 \times \underline{\hspace{2cm}} = 33.564$
- (iv) The Predecessor of 8693 = _____
- (v) The number which is to be multiplied is called _____

Ques-2 Write True or False.

- (i) $401017 > 407023 = \underline{\hspace{2cm}}$
- (ii) 20001 is divisible by 10. = _____
- (iii) The Predecessor of 1 Million is 999999. _____
- (iv) $183 \times 53 = 9,699$. _____
- (v) A line segment is part of a line. _____

Ques-3 Solve the following:-

$$\begin{array}{r} \text{(i)} \quad 345678 \\ \quad 832343 \\ + \quad 51382 \\ \hline \end{array}$$

$$\begin{array}{r} \text{(ii)} \quad 573253 \\ \quad - 239972 \\ \hline \end{array}$$

$$\begin{array}{r} \text{(iii)} \quad 65389 \\ \quad \quad \times 42 \\ \hline \end{array}$$

$$\text{(iv)} \quad 32 \overline{) 832954}$$

Ques-4 Write the following in :-

- (i) 8,32,765 (words) -
 (ii) 10,709 (words) -
 (iii) Sixty two crore eight lakh six thousand four hundred two -
 (iv) Five lakh twenty thousand four hundred three -

Ques-5 Round off these numbers to the :-

- (i) 83 (Nearest ten) - _____ (iii) 15264 (Nearest thousand) - _____
 (ii) 1876 (Nearest hundred) - _____ (iv) 649382 (Nearest lakh) - _____

Ques-6 Write correct Roman Numeral.

- (i) 50 - _____ (ii) 100 - _____

Ques-7 Change the following Roman Numbers into digits.

- (i) CC - _____ (ii) CL - _____

Ques-8 Study the diagram and then answer the given questions:-

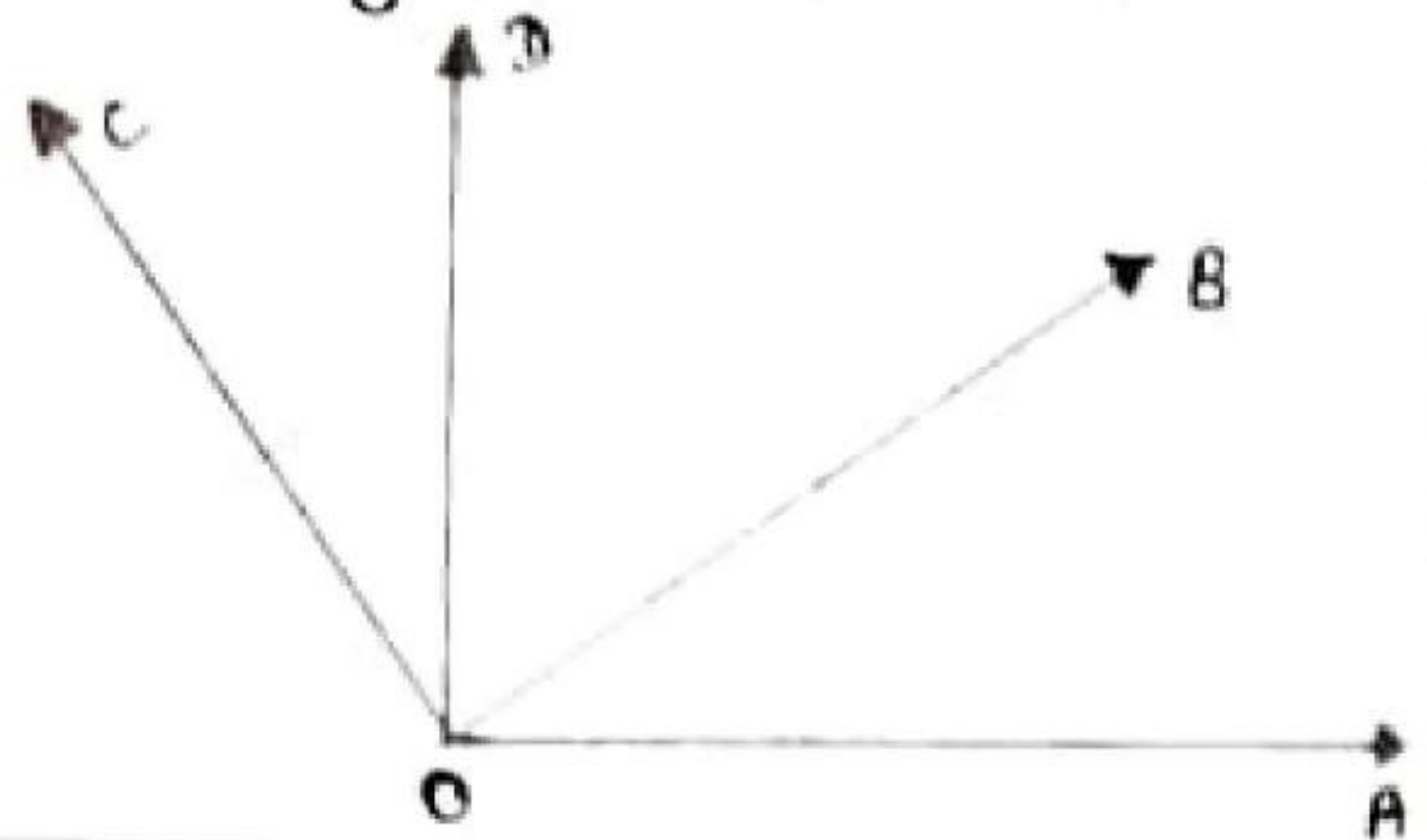
(i) What is used to measure angles?

Ans -

(ii) $\angle AOB$ is an _____ angle.

(iii) Which angle is $\angle AOB$?

Ans -



Ques-9 Solve the word problems:-

(i) Jacqueline spends \$64.00 on peanuts. Each peanut costs \$8.00. How many peanuts did Jacqueline buy?

Sol -:

19/08/21
Roll No. CHANDRA BHAN MEMORIAL PUBLIC SCHOOL

Name V

DELTA

Topic SAFETY PRACTICE WORKSHEET

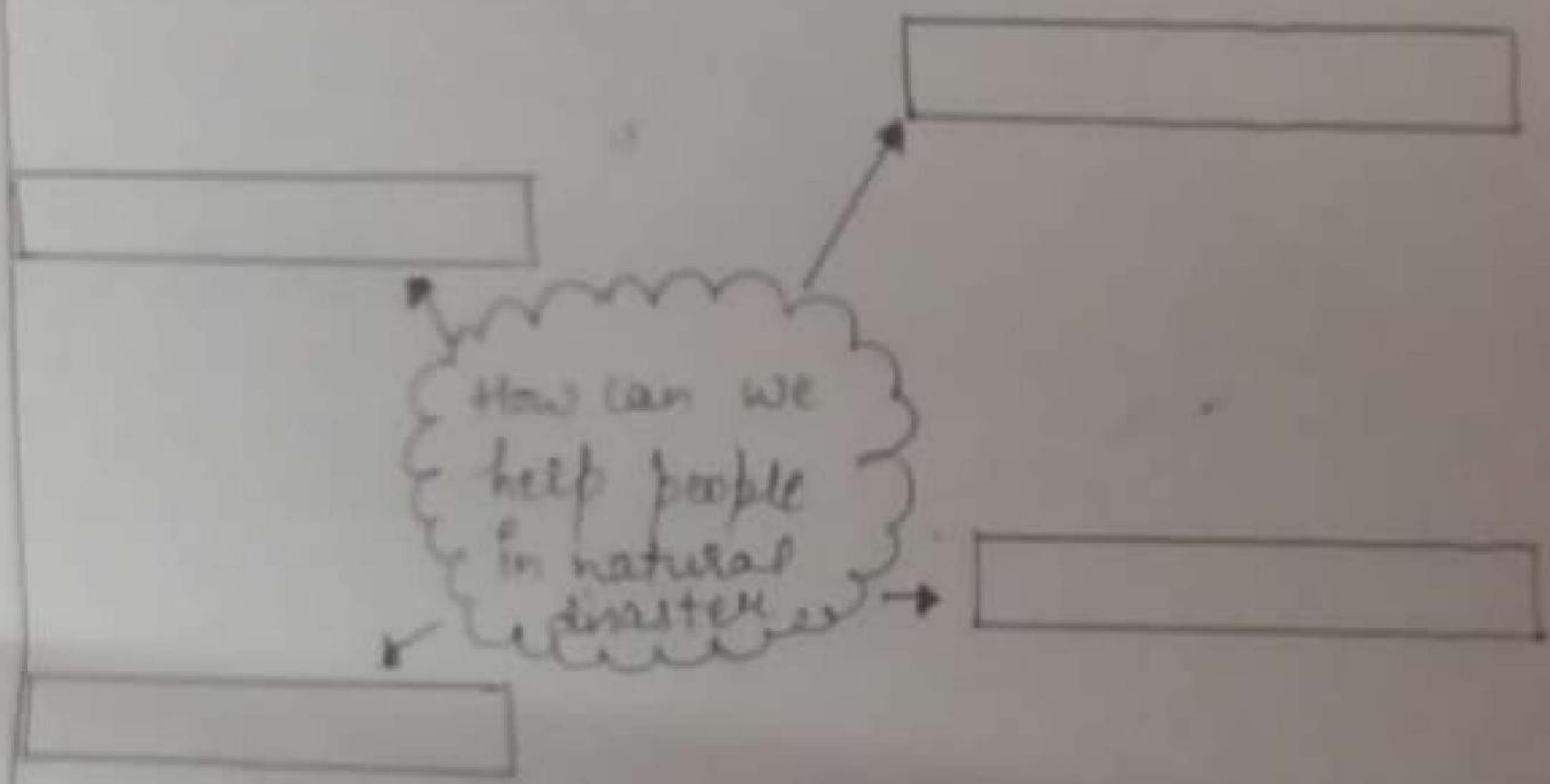
Ques 1 Draw the picture of (first aid)

Ques 2 Write any two steps for the following.

1. What first aid should be given in case of dog bite

2. What first aid should be given in case of fracture

Ques 3 Complete the table -



Ques 4 Difference between (Metamorphic rock and Sedimentary rock)

--

NAME - _____

CHANDER BHAN MEMORIAL PUBLIC SCHOOL

R. No - _____

CLASS - V

Date - _____

S-ST Practice WORKSHEET

Q.1 Write the meaning of words :-

- (i) Continent - _____
- (ii) Religion = _____
- (iii) Modern - _____
- (iv) Useful - _____

Q.2 Write the definitions of the following:-

- (i) Longitude - _____
- (ii) Latitude - _____
- (iii) Reformer - _____

Q.3 Fill in the blanks:-

- (i) Equator is the _____ Parallel.
- (ii) Meridians are also known as _____
- (iii) The person who makes maps is called _____
- (iv) The axis of real earth is _____.
- (v) The globe can be moved around axis from _____ to _____.

Q.4 True or False:-

- (i) Map is the representation of earth. _____
- (ii) crops is not shown on physical map. _____
- (iii) globe is not a part of a map drawn on a flat surface. _____
- (iv) The blue colour on the map shows plains. _____

Ques-5 Name them! -

- (i) Latitude and Longitude are measured in _____
- (ii) The lines of latitude _____
- (iii) A globe is a _____
- (iv) On the globe, countries, oceans and continents are shown in _____
- (v) A needle fixed through a globe in a tilted manner is called _____

Ques-6 Give answer in one word: -

(i) who was the author of the book satyarthaprakas?

Ans -

(ii) In which year was Sati abolished?

Ans -

(iii) who was the founder of widow remarriage Association?

Ans -

(iv) who is a notable social reformer of Tamil Nadu?

Ans -

(v) what is founded by Raja Ram Mohan Roy?

Ans -

Ques-7 Draw the diagram of Latitude and Longitude.

Latitude

Longitude

NAME -

CHANDER BHAN MEMORIAL PUBLIC SCHOOL

R. No -

CLASS - Y

DATE -

G.K PRACTICE WORKSHEET

QW-1 Answers the following questions:-

(i) Which is the largest continent?

Ans-

(ii) Who developed the first vaccine?

Ans-

(iii) Which country is shaped like a boot?

Ans-

(iv) Who is the first lady prime minister in the world?

Ans-

(v) What is the biggest planet in our solar system?

Ans-

QW-2 Fill in the blanks:-

(i) The second largest planet in solar system _____

(ii) Plastics pollute the earth as they are not _____

(iii) Commonwealth 2014 were held in _____ city.

(iv) _____ stars in the Milky way.

(v) _____ is the diameter of MERCURY.

QW-3 Name them -

(i) In Hindu mythology, who is the god of death?

(ii) The holy book of Parsis

(iii) The author of Sukhmani Sahib

(iv) The planet has the most volcanoes

Ques-4 Matching :-

(i) River	Rhino
(ii) Dachigam	Ears
(iii) Aquatic	Chlorophyll
(iv) Corn	hangul
(v) Kaziranga	mouth
(vi) Green colour present in leaves	Plants that grow in water

Ques-5 Which animal am I?

(i) I have 2 legs, 2 wings and a tail. I eat worms and insects.

Ans -

(ii) I can smell things and have 4 legs. I can wag my tail and like to play.

Ans -

Ques-6 Write the inventors name of given inventions?

(i) Internet -

(iii) Air plane -

(ii) Space Rocket -

(iv) clock -

Ques-7 Give the answers of following current affairs :-

(i) Which port is renamed as Shyama Prasad Mukherjee port?

Ans -

(ii) Which State reports first confirmed coronavirus case in India?

Ans -

(iii) What is launched by PM Modi on April 14, 2020?

Ans -

Ques-8 What are the precautions that need to be taken to protect from the coronavirus?

Ans -

CHANDER BHAN MEMORIAL PUBLIC SCHOOL

CLASS - Vth

Name:-

SUBJECT - COMPUTER

Rollno:-

WORKSHEET - 3

Q-1 what is Searching on internet?

Q-2 write few words about them :-

(i) online shopping :-

(ii) online Education :-

(iii) Hardware :-

(iv) Software! -

Q-3 Write any three uses of Internet in our day to day life?