

CHANDER BHAN MEMORIAL PUBLIC SCHOOL
WORKSHEET FOR CLASS - VII
SUB :- ENGLISH

Q1. fill in the blanks with either, neither, each or every.

1. _____ of us had the courage to go into the sea in this weather.

2. _____ participant was given a craft kit at the workshop.

3. _____ child was attended to personally during the lesson.

4. _____ you or Tina must help your father with the chores.

5. _____ member of the gang was arrested last night.

6. It is compulsory for _____ student to attend this class.

7. _____ of the players apologized to the umpires.

8. _____ musician in the orches strikes a different note.

Q.2. fill in the blanks with the correct quantifiers

1. _____ (A few, few) of us stayed back after school to decorate the stage.

2. _____ (A little, The little) milk we have left will not be enough for break-fast.

3. _____ (few, the few) children could understand the difficult lesson.

4. _____ (little, A little) compassion goes a long way in helping someone.

5. we received _____ (the little, little) support when we started the evening school for the villagers.

6. Reema's mother has bought her a computer by saving _____ (little, a little) money every month.

c. fill in the blanks with the correct determiners.

1. The storm uprooted _____ (many, much) trees in the area.

2. would u like to have _____ (any, some) tea now?

3. The police asked Rohan how _____ (many, much) extra classes?

4. Do you need to attend _____ (any, much) extra classes?

5. The writer sent his novel to _____ (any, several) publishers.

6. Let us offer her _____ (any, some) financial support to help her during the crisis.

7. The outbreak of dengue affected _____ (several, much) children in the locality.

8. Too _____ (much, many) opinions will confuse you.

— x —

पन्द्रमान में मोरियल पब्लिक स्कूल

नाम:

विषय : हिन्दी
कक्षा : सातवीं
वर्कशीट - 2

शील नं०:

- प्र० 1 → सही शब्द पर गोला लगाइएँ :
- ① स्वर्ण → सोना, चाँदी, हीरा
 - ② आभा → चमक, मुद्रा, सुंदर
 - ③ धरती → धरा, पानी, लहर
 - ④ पैर → पग, पीताम्बर, पंख
 - ⑤ सूरज → सूर्य, शानि, शैशानी

प्र० 2 → वाक्य बनाइएँ :

- ① शांति -
- ② शैशानी -
- ③ कायर -
- ④ वीरगति -
- ⑤ मूर्ति -

प्र० 3 → सही शब्द से मिलान कीजिएँ :

- | | |
|--------------|-------------|
| ① सूरज | सात रंग |
| ② घास | पाँच |
| ③ इन्द्रियाँ | दूरी - दूरी |
| ④ आकाश | आग का गोला |
| ⑤ इन्द्रधनुष | नीला |

प्र० 4 → किसी एक विकल्प पर सही (✓) का निशान लगाओ -

(क) 'रानी' शब्द का बहुवचन रूप कौन सा है?

1. रानिएँ () 2. रानियाँ () 3. रानिओ ()

(ख) पंडित का विलोम क्या है?

1. पीडिताईन () 2. पंडिती () 3. धूर्त ()

(ग) 'राम अच्छा लड़का है' वाक्य में विशेषण है:

1. राम () 2. लड़का () 3. अच्छा ()

(घ) 'श्याम खाना बनाता है' वाक्य में क्रिया है:

1. श्याम खाना () 2. बनाता है () 3. खाना बनाता ()

प्र० 5 → विशेषण शब्द ^{होकर} भरिए:

① राम _____ लड़का है। (अच्छा / गौर)

② उसकी माताजी _____ है। (सुंदर / खाना बनाती)

③ मेरा भाई _____ है। (इमानदार / वकील)

④ उसके पास _____ कलम है। (निहंसी / कीमती)

⑤ माती _____ पौधे लगा रहा है। (सुंदर / च्याशे)

प्र० 6 → सही व गलत बताइएँ:-

① संज्ञा के तीन भेद होते हैं।

② किसी काम का करना या होना, क्रिया कहलाती है।

③ संज्ञा के स्थान पर प्रयोग होने वाले विशेषण होते हैं।

④ सर्वनाम के चार भेद हैं।

⑤ मैं, तू, वह शब्द संज्ञा हैं।

CHANDER BHAN MEMORIAL PUBLIC SCHOOL

CLASS – VII

MATHS WORKSHEET

NAME :- _____

ROLL NO. :- _____

DATE :- _____

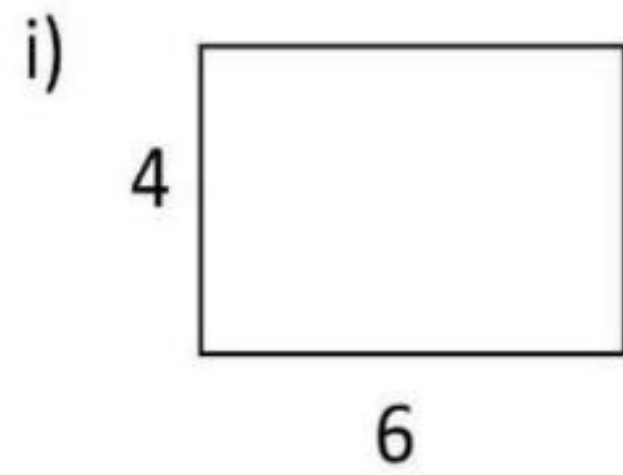
1. Find the lowest and greatest prime number between 8 to 20.
2. A student multiplied 8536 by 36 instead of multiplying by 63. What will be the difference between the answer obtained by student and the correct answer?
3. The ratio of length and width of the door is 5:3 and its perimeter is 48m. Find the measurement of door.
4. There are 30 female and 70 male workers in a factory. Find the ratio between
 - i) Number of male and female workers.
 - ii) Number of female workers to total number of workers.
5. Suhani wants to divide 35 toffees among Geeta and Sangeeta in ratio of their age. Geeta is 16 yrs old and Sangeeta is 12 yrs old. How many toffees will Geeta and Sangeeta get?
6. A fruit seller sold 60kg of fruits on Monday @Rs50/kg, 30kg of fruits on Tuesday @Rs50/kg and 10kg of fruits on Wednesday @Rs50/kg. Find the total amount of sale made by him during these 3 days.
7. In an election, for being successful candidates need 5,85,700 votes but he could secure only 4,87,985 votes. By how many votes he lost the election?
8. Fill in the blanks:-
 - i) The sum of odd number is always_____.
 - ii) A number having only two factor is called_____.
 - iii) The age of Radha is x yrs and Sarita is 4 yrs younger to her. So age of Sarita is_____.
 - iv) The smallest natural number is _____ and the smallest whole number is _____.
 - v) If the product of two whole number is 0, then one of the two numbers must be_____.
 - vi) The smallest even prime number is_____.

9. A rectangular plot of land is 400m long and 250m wide. What is the cost of tiling the plot at the rate of Rs.8/hundred sq.m?

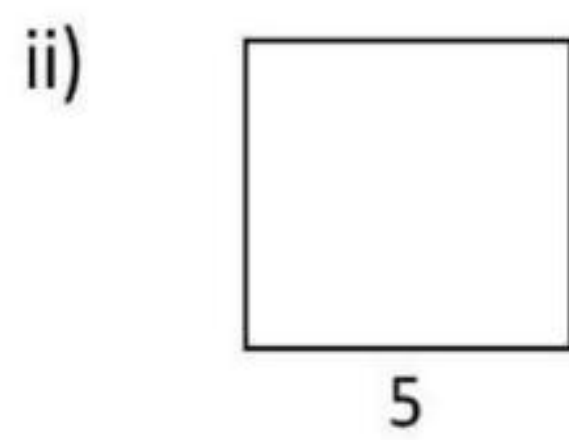
10. Match the following:-

SHAPES

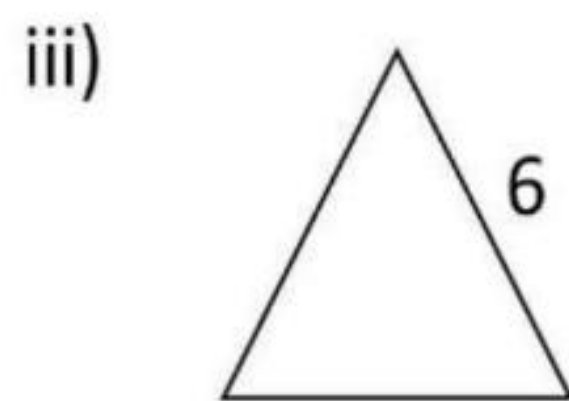
PERIMETER



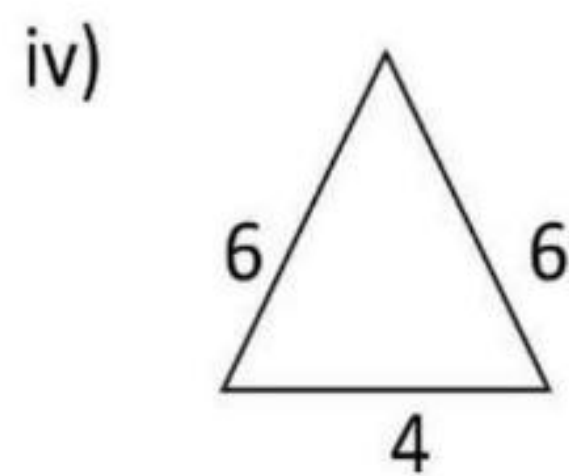
Rectangle



Square



Equilateral triangle



Isosceles triangle

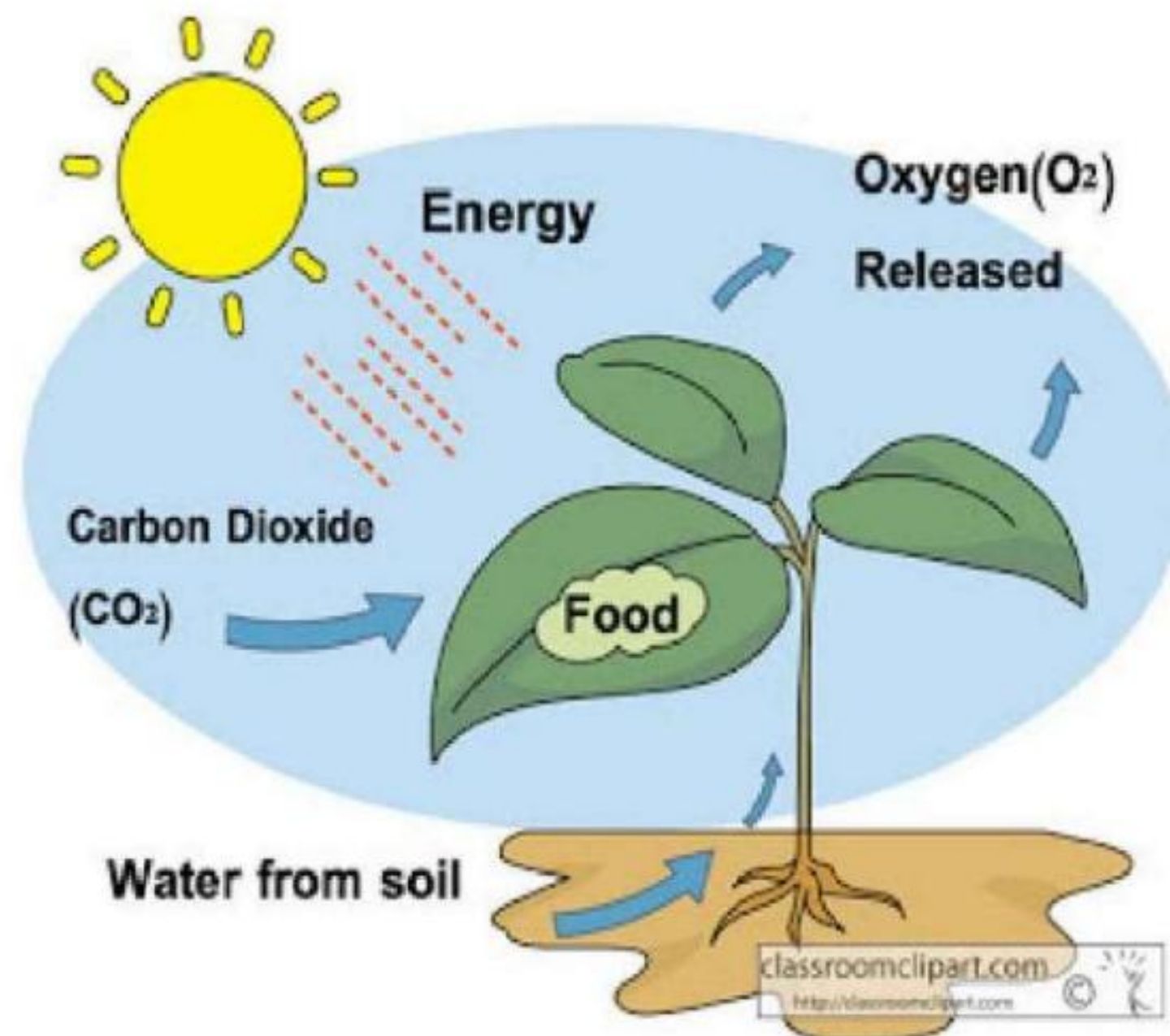
a) 10

b) 18

c) 20

d) 25

CHANDER BHAN MEMORIAL PUBLIC SCHOOL
SCIENCE WORKSHEET
CLASS-7



Que1 MULTIPLE CHOICE QUESTIONS

1. Amarbel is an example of -
 - (a) Autotroph
 - (b) Parasite
 - (c) Heterotroph
 - (d) Host
2. The plant which traps and feeds on insects is -
 - (a) Cucuta
 - (b) Rose
 - (c) Pitcher plant
 - (d) sunflower
3. Which of these components of food can be synthesized by plants? -
 - (a) Carbohydrate
 - (b) Fats
 - (c) Proteins
 - (d) All of these
4. Which of these is/are necessary for photosynthesis to take place? -
 - (a) Carbon dioxide
 - (b) Chlorophyll
 - (c) Water
 - (d) All of these
5. The trapped insect gets entangled in the hair in -
 - (a) Green plant

- (b) Insectivorous plants
- (c) Grass
- (d) None of these

Que2 Name the following :

1. Two agents of weathering.
2. The uppermost layer of soil.
3. The type of soil that can hold more water.
4. The soil which is a mixture of sand, clay and silt.
5. Three agents of soil erosion

Que 3 True or False :

1. Canines are meant for tearing flesh.[]
2. Oesophagus is also known as food pipe.[]
3. Mouth cavity contains teeth and salivary glands only.[]
4. Deer is a ruminant.[]
5. Large intestine is longer than small intestine. []

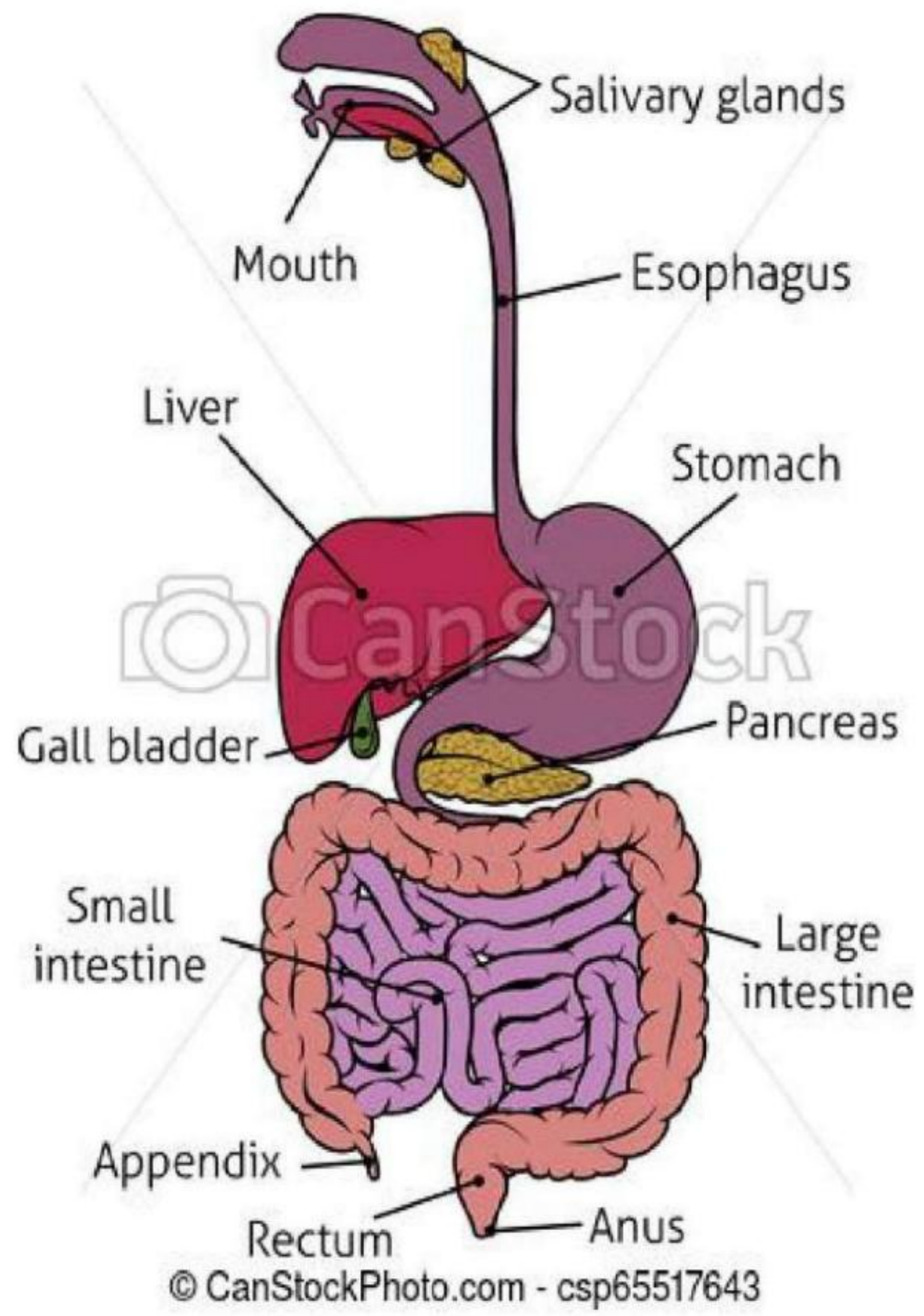
Que4 Name the following :

1. 4 types of teeth.
2. Digestive glands in human body.
3. Acid produced in stomach.
4. Scientist who discovered the working of stomach.
5. The sac like structure present between the small intestine & large intestine in ruminants.

Que5 Fill in the blanks:

1. The mode of taking food into the body is called _____
2. In the process of _____ food is broken down in to simpler substances.
3. The _____ canal start with mouth and ends in anus.
4. _____ glands are present in mouth.
5. Saliva helps in the digestion of _____ in food.

Que6 Draw diagram of human digestive system



CHANDER BHAN MEMORIAL PUBLIC SCHOOL
WORKSHEET OF SOCIAL STUDY (GEOGRAPHY)
CLASS: 7TH

Ques A. Write the names of weather instruments:

1. Measures the temperature
2. Measures atmospheric pressure
3. Measures the amount of rainfall
4. Show the direction of the wind

Ques B. Give three answers of each question:

1. Forms of precipitation
2. Types of wind
3. Types of rainfall
4. Examples of endogenic forces

Ques C. Our atmosphere is divided into five layers, write their names starting from the earth's surface.

Ques D. Answer in one word:

1. How many types are there of an earthquake weave?

2. Who invented the standard unit of measuring temperature is degree Celsius?


3. Name the place in the crust where the movement starts?

4. Name the highest waterfall of Venezuela in South America?

5. Which is the most plentiful gas in the air?

6. Name the most important layer of the atmosphere?

Ques E. Label a volcano diagram:



चन्द्रमाल मैमोरियल पब्लिक स्कूल

पी.ए. - 1 - अभ्यास पत्रिका (2)

कक्षा - सातवीं ; विषय - संस्कृत

नाम :-

रोल नं. :-

ध्यान दी :-

★ क्रिया के जिस रूप से कार्य होने या करने के समय का ज्ञान होता है, उसे काल कहते हैं। संस्कृत में काल को लकार कहते हैं।

काल (लकार)

- (i) लट् लकार (वर्तमान काल) (ii) लृट् लकार (भविष्यत्काल) (iii) लङ् लकार (भूत काल) (iv) लोट् लकार (आज्ञावाचक) (v) विधिलिङ् लकार (चाहिस के लिए)

लट् लकार व लृट् लकार के बारे में आपने छठी कक्षा में सीखा था। अब हम लङ् लकार अर्थात् भूतकाल के बारे में सीखेंगे।

प्रश्न :- 1 :- वाकिका यद् करके लिखी :-

यद् धातु लङ् लकार (भूतकाल)

	एकवचनम्	द्विवचनम्	बहुवचनम्
प्रथम पुरुषः	(सः/सा) अपठत् (वह पढ़ा)	(तौ/तौ) अपठताम् (वे दो पढ़े)	(ते/ताः) अपठन् (वे सब पढ़े)
मध्यम पुरुषः	(त्वम्) अपठः (तुमने पढ़ा)	(युवां) अपठतम् (तुम दो पढ़े)	(युयं) अपठत (तुम सब पढ़े)
उत्तम पुरुषः	(अहम्) अपठम् (मैंने पढ़ा)	(आवां) अपठाम (हम दो पढ़े)	(वयम्) अपठाम (हम सब पढ़े)

★ सबसे पहले हम प्रथम पुरुषः सीखेंगे।

- (i) वृक्षात् फलम् अपतत् । वृक्ष से फला गिरा। (ii) सृगौ अधावताम् । दो हिरण दौड़े। (iii) वाकिकाः अहसन् । बहून् सी लड़कियाँ हँसी।

B612

प्रश्न :- 2 :- हिंदी अनुवाद करो :-

- (i) मयूरी अनृत्याम् ।
 (ii) रमा यत्रम् अलिखत् ।
 (iii) महिलाः उद्याने अक्षमन् ।
 (iv) पत्रे अपठताम् ।

दो सौर नान् ।

प्रश्न :- 3 :- लङ्लकारस्य प्रथम पुरुषस्य द्विवचनस्य रूपं चिह्न (धुनी) :-

- (क) अपठत् , अपठः , अपठताम् , अपठाम् अपठताम्
 (ख) अचलताम् , अचलात् , अचलन् , अचलः _____
 (ग) अलिखन् , अलिखम् , अलिखताम् , अलिखत् _____
 (घ) अन्मत् , अन्मः , अन्मन् , अन्मताम् _____

प्रश्न :- 4 :- निम्नलिखित वाक्येषु लङ्लकारस्य उपसर्गक्रियां लिखत (प्रथम पुरुषः) :-

- (i) फलम् वृक्षात् अपठत् | (पठ्)
 (ii) अश्वो तीव्रम् _____ | (धाव्)
 (iii) बालिका जनकम् _____ | (नम्)
 (iv) नरः भोजनम् _____ | (खाद्)

प्रश्न :- 5 :- निम्नलिखित वाक्यानाम् लङ्लकारैः परिवर्तनम् कुरुत :-

- (i) नृपः प्रासादे वसति ।
 (ii) अजे परतः ।
 (iii) कच्छपाः चलन्ति ।
 (iv) नरः उद्याने गच्छति ।

नृपः प्रासादे अवसत् ।

CHANDER BHAN MEMORIAL PUBLIC SCHOOL

CLASS - VIIth

NAME :-

SUBJECT - COMPUTER

CLASS :-

WORKSHEET-2

ROLL No :-

Q-1 Define :-

(i) viruses :

(ii) cyber crime :

(iii) Hackers :

(iv) Backup :

Q-2 what is photoshop? write any four photoshop tools.

Q-3 what is video conferencing?

Q-4 write full form of them! -

(i) B2C :

(ii) C2B !