

Name CHANDER BHAN MEMORIAL PUBLIC SCHOOL

Roll No _____

V

DELTA

DATE: _____ English practice worksheet

Ques Write the english and hindi meaning of the following :-

① King :-

② Story :-

③ Warrior :-

Ques Write the antonyms (opposite) of the following :-

① Happy :-

② Bright :-

③ Brave :-

④ Different :-

Ques Make sentences with given homophones :-

① Blew :- _____
Blue :- _____

② Knows :- _____
No :- _____

Que:-4 Fill the similes:-

① As _____ as lion

② As _____ as fox

③ As _____ as snow

④ As _____ as snail

Que:-5 Use conjunctions and rewrite the sentences:-

① She is not able to come to school. She is suffer from fever.

② Would you like to have tea. coffee?

Que:-6 Use correct form of Verb:-

① She is _____ for her since morning (wait)

② He _____ mangoes (love)

③ They have _____ (go)

④ I will _____ you tomorrow. (meet)

⑤ She had been _____ a lesson since evening. (read)

Que:-7 Write the rhyming words:-

① Child :-

③ Slow :-

② fear :-

④ Hen :-

नाम: चन्द्र भान मेमोरियल पब्लिक स्कूल
 कक्षा - पांचवी
 दिनांक: हिन्दी अन्वय पुस्तिका

DIITA

प्रश्न शब्दार्थ लिखो :-

❁ विशाल :- ❁ निर्दोष :-

❁ संतुष्टि :- ❁ साथ :-

प्रश्न अनेक शब्दों के लिए एक शब्द लिखो :-

❁ जो कभी न मरे :-

❁ जो मांस खाता है :-

❁ साथ पढ़ने वाला :-

प्रश्न वाक्यों में से उद्देश्य और विधेय अलग करके लिखो :-

❁ शेर जंगल का राजा है।
 उद्देश्य → विधेय →

❁ राम का बैरा चोर है।
 उद्देश्य → विधेय →

③ राधा नृत्य कर रही है।
 उद्देश्य → विधेय →

Q04 निम्नलिखित विराम चिहनों से वाक्य बनाओ:-

1. (!) → _____
2. (9) → _____
3. (-) → _____

Q05 काल के भेद लिखो:-

1. मैं काल किल्ली जाऊंगा। _____
2. राम पाठ पढ़ रहा है। _____
3. मैं आया गया। _____

Q06 अपठित गद्यांश -

हमारे देश में अनेक त्योहार मनाए जाते हैं। इन त्योहारों को धार्मिक दृष्टि से मनाया जाते या महापुरुषों की याद में, किसी ऐतिहासिक - पौराणिक घटना - प्रसंग की याद में या प्रेरणा ग्रहण करने के लिए, या प्रसन्नता की कटाई और अनाज भंडारण की सुविधा में मनाए जाते हैं। इनके मूल में देश की अस्थिरता को मजबूत करने का उद्देश्य छिपा रहता है। तदनु परिवर्तन के रूप में मनाए जाने वाले त्योहारों से हमारी प्रकृति से निकलता बढ़ती है। राष्ट्रीय पर्व से हमारे मन में एक-धर्म, देशभक्ति, त्याग और वृद्धि की भावना प्रगाढ़ होती है। स्वतंत्रता दिवस, गांधी जयंती, गणतंत्र दिवस हमारे राष्ट्रीय पर्व हैं।

● निम्नलिखित प्रश्नों को पढ़कर उत्तर दीजिए:-

1. त्योहार मनाए जाने का मूल उद्देश्य क्या है?
2. उपर्युक्त गद्यांश का अर्थ लिखिए -
3. राष्ट्रीय त्योहारों से हमारे मन में किस प्रकार की भावना प्रगाढ़ होती है?
4. तीन राष्ट्रीय त्योहारों के नाम बताओ -
5. परिवर्तन का अर्थ लिखिए -

CHANDER BHAN MEMORIAL PUBLIC SCHOOL

NAME - _____

R. NO - _____

Date - _____

CLASS - Y

MATHS PRACTICE WORKSHEET

Ques-1 Fill in the blanks:-

- (i) $1 \text{ km} = \underline{\hspace{2cm}} \text{ m}$.
- (ii) Right angle = $\underline{\hspace{2cm}}$ degree.
- (iii) $\underline{\hspace{2cm}}$ Lakhs = 1 crore.
- (iv) An obtuse angle is more than a $\underline{\hspace{2cm}}$ angle but less than $\underline{\hspace{2cm}}$ angle.
- (v) The 5-digit smallest number $\underline{\hspace{2cm}}$

Ques-2 Solve the following:-

$$\begin{array}{r} \text{(i)} \quad 345678 \\ \quad 923216 \\ + \quad 432189 \\ \hline \end{array}$$

$$\begin{array}{r} \text{(ii)} \quad 754328 \\ \quad - 593998 \\ \hline \end{array}$$

$$\begin{array}{r} \text{(iii)} \quad 78932 \\ \quad \times 56 \\ \hline \end{array}$$

$$\text{(iv)} \quad 32 \overline{) 473596}$$

Ques-3 Write the following Numbers in words and expanded form.

(i) 5432 - Word form: _____

Expanded form: _____

(ii) 8634 Word form: _____

Expanded form: _____

(iii) 134 Word form: _____

Expanded form: _____

Qw-4 Write the Numbers in Ascending Order:

- (i) 4568 , 5786 , 4785 , 5471 , 3547

Ans-

- (ii) 7895 , 7485 , 7630 , 7822 , 4685

Ans-

Qw-5 Write the Numbers in Descending Order:

- (i) 7896 , 7396 , 7752 , 7532 , 7932

Ans-

- (ii) 5892 , 6382 , 5432 , 4321 , 8356

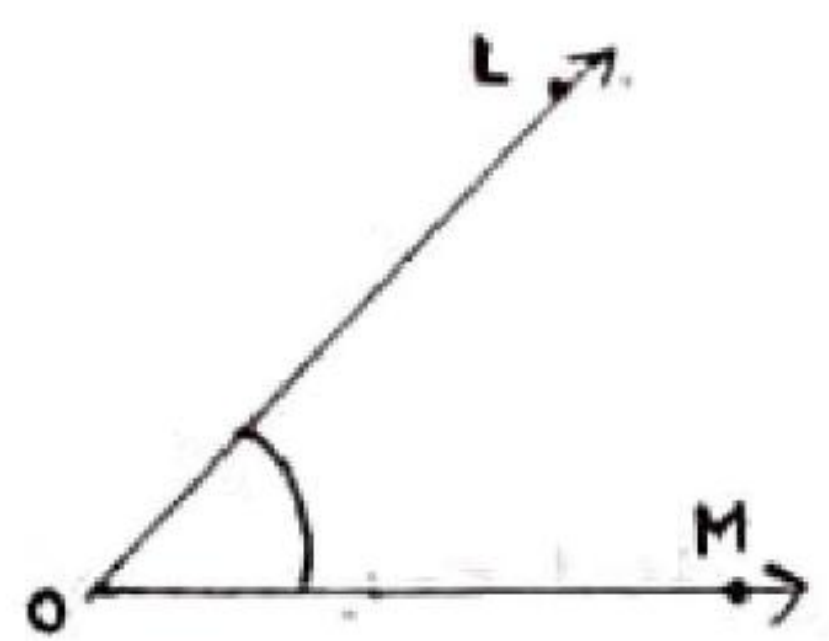
Ans-

Qw-6 Write the Roman Numbers of the following numbers:-

- (i) 20 _____
- (ii) 53 _____
- (iii) 75 _____
- (iv) 43 _____

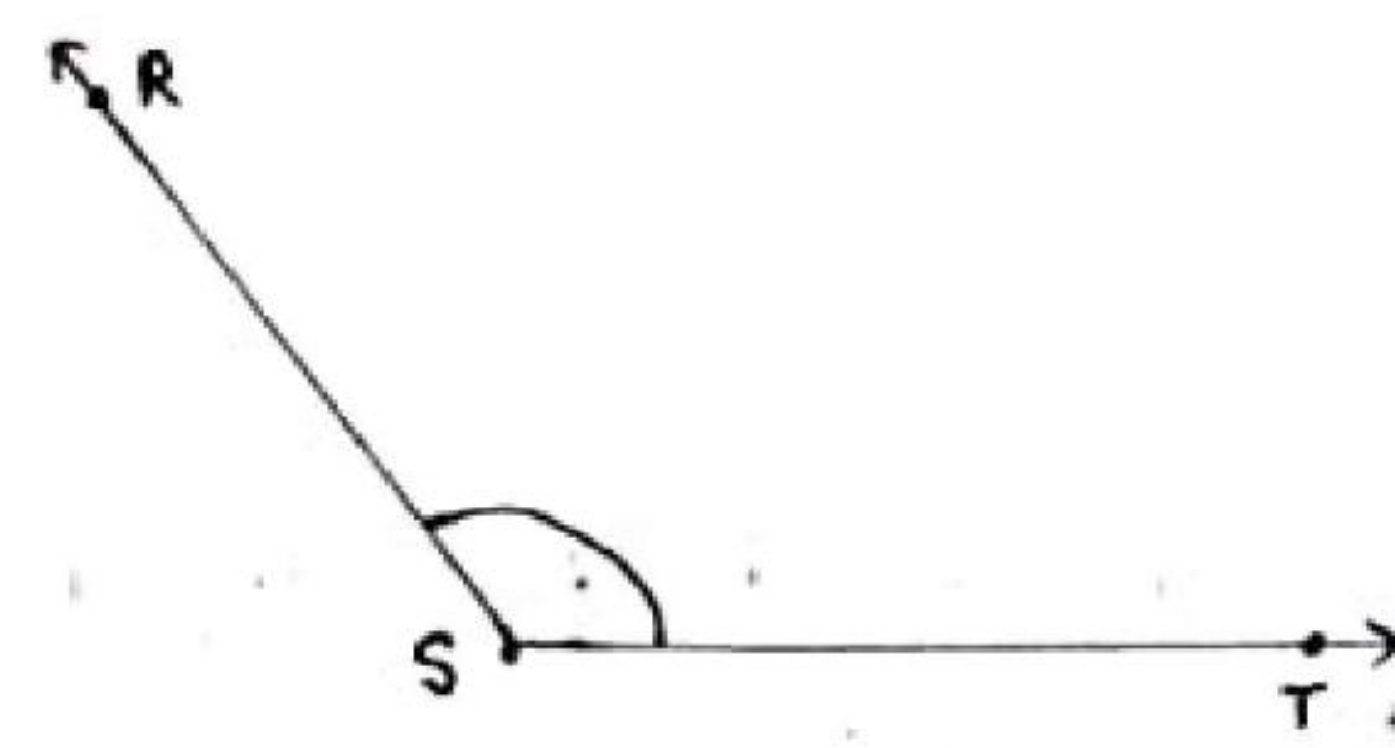
Qw-7 Name the vertex and Sides formed by the angles. Write the name of the angle also:-

(i)



Vertex: _____ Sides: _____

(ii)



Vertex: _____ Sides: _____

Qw-8 Identify the following angles as acute, obtuse or right angles

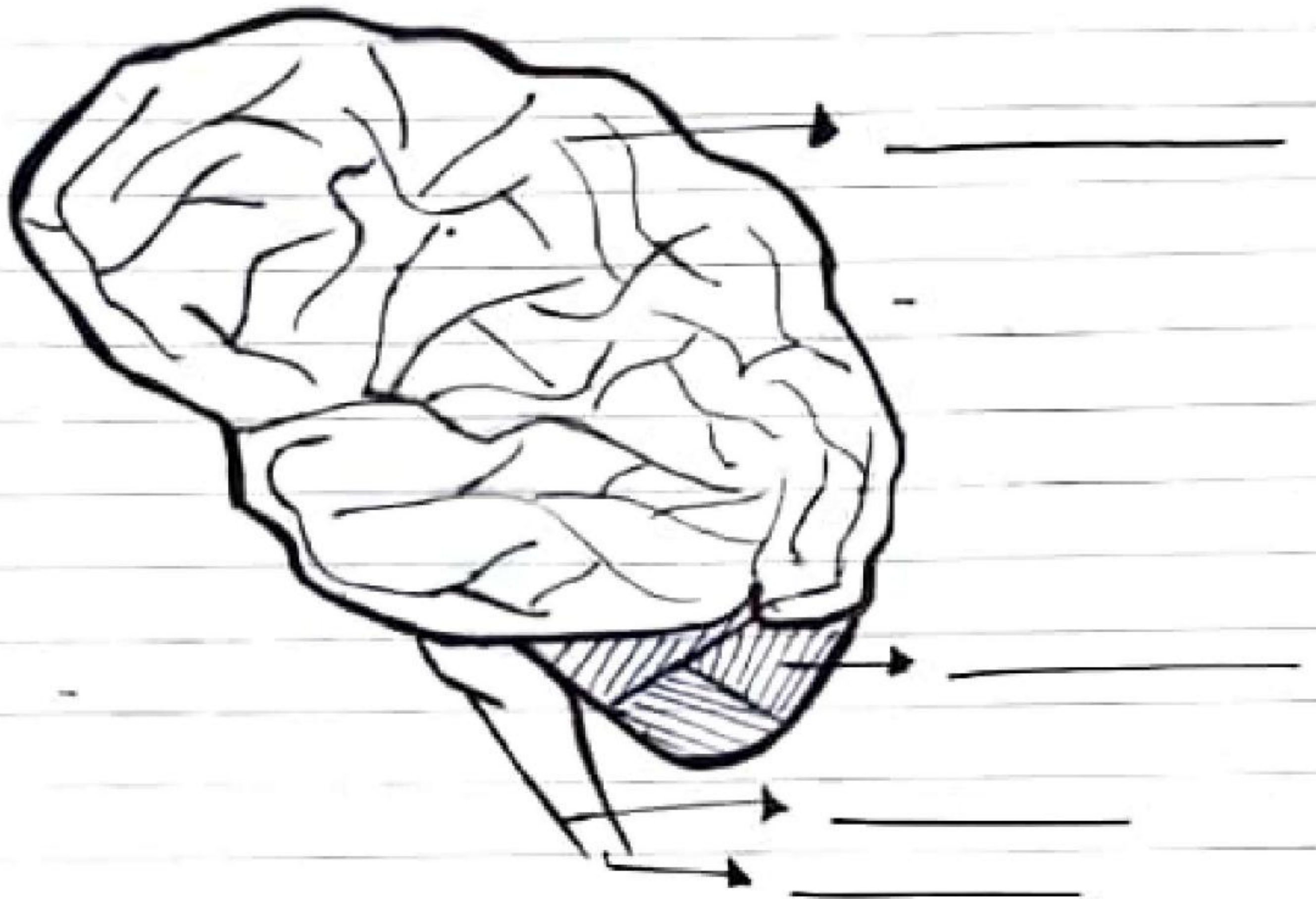
- (1) 124° _____
- (2) 97° _____
- (3) 46° _____
- (4) 90° _____

NAME _____ CHANDER BHAN MEMORIAL PUBLIC SCHOOL
 Roll No _____ V _____
 DATE _____ Science practice worksheet

DELTA/Pg no

Date





Ques 1 Write the parts of the brain :-



Ques 2 Name the joints :-

- ① Neck :- _____
- ② Elbow and knee :- _____
- ③ Shoulder :- _____
- ④ Wrist :- _____

Que:3 Write the name of the nutrients we get from these food items:-

- ① Fruit and Vegetables :- 
- ② Meat and eggs :- 
- ③ Butter :- 
- ④ Cereals :- 

Que:4 Write the defines:-

- ① Skeleton :- _____
- ② Nutrients :- _____

Que:5 Difference between Cerebrum and Cerebellum

--	--

NAME - _____ CHANDER BHAN MEMORIAL PUBLIC SCHOOL
R.NO - _____ CLASS - V
Date - _____ S-ST PRACTICE WORKSHEET

Qw-1 Write the word meaning :-

- (i) Climate - _____
- (ii) Reformer - _____
- (iii) Zone - _____
- (iv) Extreme - _____

Qw-2 Fill in the blanks :-

- (i) A _____ is a model of the earth.
- (ii) A book of maps is called _____
- (iii) A _____ represent the earth on a flat surface.
- (iv) Air pollution increases the level _____
- (v) Pollution is a big _____

Qw-3 Give two examples of each of the following :-

- (i) Natural source of energy _____ , _____
- (ii) Diseases caused by air pollution _____ , _____
- (iii) Diseases caused by drinking polluted water _____ , _____

Qw-4 Define the following :-

- (i) Pollution :- _____

- (ii) Map :- _____

- (iii) Acid Rain :- _____

Ques-5 Write the three names of famous social and religious reformers of India

1. _____ 2. _____ 3. _____

Ques-6 These Samaj are established by whom? Write their names.

(i) Brahma Samaj: - _____

(ii) Arya Samaj: - _____

(iii) Prarthana Samaj: - _____

Ques-7 Differentiate between Physical and political maps?

Ans -	Physical map	Political map

Ques-8 Name the four directions and draw diagram of directions?

Ans -

Four Directions	Diagram of Directions
1.	
2.	
3.	
4.	

1.

2.

3.

4.

NAME - CHANDER BHAN MEMORIAL PUBLIC SCHOOLR. NO - _____ CLASS - YDATE - _____ G.K. PRACTICE WORKSHEETQue-1 Answers the following questions:-

(i) Which state is called Orchid Paradise in India?

Ans -

(ii) What is bibliophobia?

Ans -

(iii) What is the currency of Italy?

Ans -

(iv) Which leader used the slogan "Jai Hind"?

Ans -

(v) What is the full form of PHD?

Ans -

(vi) - Which animal eats snow?

Ans -

Que-2 fill in the blanks:-

(i) The largest diamond in the world is _____

(ii) The world forest Day is celebrated on _____

(iii) The old name of Indonesia is _____

(iv) The first European invader of Indian Soil _____

(v) The first person to reach the North pole by over land journey _____

(vi) _____ is the first African American president of the United States of America.

(vii) _____ is the Capital of Egypt.

Ques-3 State whether True or False:-

- (i) Amartya Sen was awarded the Nobel Prize for his contribution to welfare Economics. _____
- (ii) Sachin Tendulkar has not played a single International T20 match for India. _____
- (iii) Earth Rotation is also called annual motion of the earth. _____
- (iv) The Mahabharata is a part of the Bhagavad Gita. _____
- (v) An Atlas is a book of maps. _____

Ques-4 Name them:-

- (i) The Supreme Commander of armed forces of our country _____
- (ii) The founder of Sikhism _____
- (iii) The third Indian cricketer to get 400 wickets _____
- (iv) The first blind IAS officer of Chhattisgarh _____
- (v) World's largest sea bridge was unveiled by China _____

Ques-5 Write the capital of following states:-

- | | |
|-----------------------|---------------------|
| (i) Jharkhand - _____ | (iii) Bihar - _____ |
| (ii) Tripura - _____ | (iv) Assam - _____ |

Ques-6 Give the answer of following current affairs:-

- (i) What is India's rank on EIU's Global Democracy Index 2019?

Ans-

- (ii) Allocation for Bharat Net Programme for 2020-21 is

Ans-

- (iii) Who has been appointed first chairman of National Medical Commission?

Ans-

CHANDER BHAN MEMORIAL PUBLIC SCHOOL

CLASS - Vth

NAME :-

SUBJECT - COMPUTER

CLASS :-

WORKSHEET - 2

Roll No :-

Q-1 what is Abacus? who and when invented abacus?

Q-2 what is computer?

Q-3 what is page margin?

Q-4 Define the term zoom document?

Q-5 Fill in the blanks :-

1. UNIVAC is an example of _____ generation of

computer.....

2. _____ is known as the father of modern computer.

3. _____ are the most powerful computer in the world.

4. _____ replaced vacuum tubes in the second generation of computer.

Q-6 Draw an Abacus?