

CHANDER BHAN MEMORIAL PUBLIC SCHOOL  
ENGLISH WORKSHEET

CLASS-III

NAME: \_\_\_\_\_

DATE: \_\_\_\_\_

Ques-1 Read the following passage and answer the questions:-

Larry is a frog. Larry is green with brown spots. He loves to play in the pond. Sometimes Larry catches flies. He likes to eat flies for dinner. After Larry catches flies, He hops around the pond.

① What is Larry?

Ans:-

② Where does Larry love to play?

Ans:-

③ What does Larry catch?

Ans:-

Ques-2 Fill in the blanks with appropriate option:-

- 1) Gaurav \_\_\_\_\_ to play football.
- 2) They live in a \_\_\_\_\_ house.
- 3) The \_\_\_\_\_ keeps the body cool.
- 4) A rainbow has \_\_\_\_\_ colours.

Beautiful, Seven, Cucumber, Loves, Luck

Qw!-3 Reorder the words to make a complete sentence!-

1) tired / was / he / very.

---

2) aloud / the baby / cried.

---

3) are playing / the children / a game.

---

Qw!-4 Change the gender of given words!-

1) Uncle - \_\_\_\_\_

2) Peacock - \_\_\_\_\_

3) Queen - \_\_\_\_\_

4) Sir - \_\_\_\_\_

Qw!-5 Colour the given picture and write 3 lines about it!-



---

---

---

---

नाम - \_\_\_\_\_

प्रश्न-1 नीचे लिखे गद्यांश को पढ़कर निम्न प्रश्नों के उत्तर दीजिए :-

एक महली तालाब में रहती थी। महली सुनहरे रंग की थी। उसे अपनी सुंदरता पर बड़ा धमंड था। वह सबसे अलग-अलग रहती थी। एक दिन वह गंदे पानी की धारा में चली गई, उसका सुनहरा रंग फीका पड़ गया। उसने जब पानी में अपनी परछाई देखी तो वह बहुत उदास हो गई। उसने सोचा मैं अब मिल-जुलकर रहूंगी और कभी धमंड नहीं करूंगी।

- (क) महली का रंग कैसा था? \_\_\_\_\_
- (ख) महली को किस पर धमंड था? \_\_\_\_\_
- (ग) महली पानी में क्या देखकर उदास हो गई?
- (घ) निम्न शब्दों के विलोम शब्द लिखिए?
- (क) गंदा = \_\_\_\_\_
- (ख) उदास = \_\_\_\_\_

प्रश्न-2 निम्न वाक्यों में क्रिया-पदों के नीचे रेखा खींचिए-

- (क) माता जी खाना बना रही हैं।
- (ख) सूरज पूरब से निकलता है।
- (ग) मैं तीसरी कक्षा में पढ़ता हूँ।

प्रश्न-3 उचित सर्वनाम शब्द पर गीला बनाइए :-

- (क) यह मेरी घड़ी है।
- (ख) मैं खाना बना रही हूँ।

प्रश्न 4 दिए गए शब्दों से वाक्य बनाइए -

- (क) घड़ी - \_\_\_\_\_
- (ख) बारिश - \_\_\_\_\_


प्रश्न 5 निम्न शब्दों के बहुवचन लिखिए :-

- (क) मैज = \_\_\_\_\_
- (ख) लड़की = \_\_\_\_\_
- (ग) नहर = \_\_\_\_\_

प्रश्न 6 मिलान कीजिए :-

- |           |          |
|-----------|----------|
| (क) हाथी  | गायिका   |
| (ख) शेर   | नोंकरानी |
| (ग) गायक  | दधिनी    |
| (घ) नोंकर | शेरनी    |

प्रश्न 7 चित्र में रंग भरिए तथा उसके विषय में तीन लाइनें लिखें।



\_\_\_\_\_ (1)

\_\_\_\_\_ (2)

\_\_\_\_\_ (3)

Chander Bhan Memorial Public School  
Maths Worksheet For Class IIIrd

Name: \_\_\_\_\_

Date: \_\_\_\_\_

Q1 Solve the following:

$$\begin{array}{r} (1) + 7239 \\ 5786 \\ \hline \end{array}$$

$$\begin{array}{r} (2) + 8375 \\ 4364 \\ \hline \end{array}$$

$$\begin{array}{r} (3) 7243 \\ - 0879 \\ \hline \end{array}$$

$$\begin{array}{r} (4) 4256 \\ - 3527 \\ \hline \end{array}$$

Q2 Multiply:-

$$\begin{array}{r} (1) 754 \\ \times 7 \\ \hline \end{array}$$

$$\begin{array}{r} (2) 892 \\ \times 5 \\ \hline \end{array}$$

Q3 Circle the odd numbers:-

(1) 529, 358, 721, 247

(2) 842, 563, 977, 420

Q4 Short form:-

(1)  $300 + 50 + 2 =$  \_\_\_\_\_ | (2)  $7000 + 800 + 40 + 7 =$  \_\_\_\_\_

Q5 Write the name of months which have 31 days?

Ans. \_\_\_\_\_ , \_\_\_\_\_ , \_\_\_\_\_ , \_\_\_\_\_ , \_\_\_\_\_ , \_\_\_\_\_ , \_\_\_\_\_

Q6 Draw the plane shapes:-

square:-

Rectangle:-

Circle:-

Triangle:-

Q7 - Draw the clock:-

(1) 4:00 clock

(2) 7:30

CHANDER BHAN MEMORIAL PUBLIC SCHOOL

GK WORKSHEET

CLASS-III

NAME: \_\_\_\_\_

DATE: \_\_\_\_\_

Ques!-1 Answer the following in one word!-

a) Name the current President of India. \_\_\_\_\_

b) What is the national fruit of India? \_\_\_\_\_

c) How many months are in a year? \_\_\_\_\_

d) What is the capital of India? \_\_\_\_\_

e) How many states does India have? \_\_\_\_\_

Ques!-2 Name the companions of the following!-

1) Tom - \_\_\_\_\_

2) Jack - \_\_\_\_\_

3) Akbar - \_\_\_\_\_

4) Ali baba - \_\_\_\_\_

Ques!-3 Solve the given jumble words!-

1) PPLEA - \_\_\_\_\_

2) RAGENO - \_\_\_\_\_

3) HRRCEY - \_\_\_\_\_

4) PRAESG - \_\_\_\_\_

Qw:-4 Name the national sport of given countries:-

1) India - \_\_\_\_\_

2) Australia - \_\_\_\_\_

3) Nepal - \_\_\_\_\_

4) Pakistan - \_\_\_\_\_

5) Spain - \_\_\_\_\_

Qw:-5 How many continents are there on Earth? Name them

Qw:-6 Draw the given symbols:-

(i) NO SMOKING

(ii) SAVE WATER



CLASS - III

NAME:-

Ques 1 → Name the following :-

(1) The animal that give us wool -

(2) The animal that carry heavy loads for us -

(3) Who stitches our clothes -

(4) In the morning we take bath in -

(5) Who cooks food for us -

Ques 2 → Give two-two examples of each -

(1) Two Domestic animals \_\_\_\_\_,

(2) Air transports \_\_\_\_\_,

(3) Family members \_\_\_\_\_,

(4) Indoor games \_\_\_\_\_,

(5) Outdoor games \_\_\_\_\_,

Page No. \_\_\_\_\_  
Date \_\_\_\_\_

②

Ques 34 State True or False :-

(1) Cotton clothes keep us cool. ( )

(2) We wear woollen clothes during rainy season. ( )

(3) A dog lives in a kennel. ( )

Ques 35 Fill in the blanks with the help of given words :-

[raincoat, wings, protect, umbrella]

(1) Clothes \_\_\_\_\_ us from heat, cold and rain.

(2) We use a \_\_\_\_\_ and \_\_\_\_\_ when it rains.

(3) The bird flies with the help of its \_\_\_\_\_.

Ques 36 Draw any one water transport and colour it :-

# CHANDER BHAN MEMORIAL PUBLIC SCHOOL

CLASS - III

SUBJECT - COMPUTER  
WORKSHEET

NAME:- .....

Roll. No. ....

Q1 Write any Five uses of Computer:-

1. \_\_\_\_\_

2. \_\_\_\_\_

3. \_\_\_\_\_

4. \_\_\_\_\_

5. \_\_\_\_\_

Q2 Write any Four / Four Input & Out put devices Names:-

Input device

Output device

1. \_\_\_\_\_

1. \_\_\_\_\_

2. \_\_\_\_\_

2. \_\_\_\_\_

3. \_\_\_\_\_

3. \_\_\_\_\_

4. \_\_\_\_\_

4. \_\_\_\_\_

Spiral

Q3 Write any Five Tux paint's Tool Name :-






1. \_\_\_\_\_
2. \_\_\_\_\_
3. \_\_\_\_\_
4. \_\_\_\_\_
5. \_\_\_\_\_

Q4 Defines :-

① Cursor :- \_\_\_\_\_  
\_\_\_\_\_

② Ruler :- \_\_\_\_\_  
\_\_\_\_\_

Q5 Write the names of following tools :-

1.  \_\_\_\_\_
2.  \_\_\_\_\_
3.  \_\_\_\_\_
4.  \_\_\_\_\_
5.  \_\_\_\_\_