

Chandee Bhan Memorial Public School
English Worksheet
Class - IInd

Q1. Is it a noun or a verb?

- (a) The cat eats his treat. _____
- (b) The children were listening to the _____
story.
- (c) Your mother cooks tasty food. _____
- (d) The box is empty. _____
- (e) We run back home. _____

Q2. Circle verbs, underline nouns and
double underline adjectives :-

Pink Pillow Lies Bed
Rug Rough White
Did Make find Doll
Pretty Toy Table
Dirty Spoon Wash Cut

Q3. Fill 'is' or 'are' :-

- (a) My sister _____ a teacher
- (b) The birds _____ flying in the sky

(c) Raju _____ making a paper boat

(d) The Sun _____ a star

(e) We _____ all Indians.

84. Add phrases from the word bank to make each fragment a complete sentence :-

| | |
|----------------------------------|----------------------------------|
| (a) The lazy cat | My Dad |
| (b) The flowers in the garden | Slept all day |
| (c) The classical music | Smell so good in the summer |
| (d) Crossed the street carefully | played loudly in the living room |
| (e) parked the car on the street | The boys |

85. Write ten lines on 'My School'?

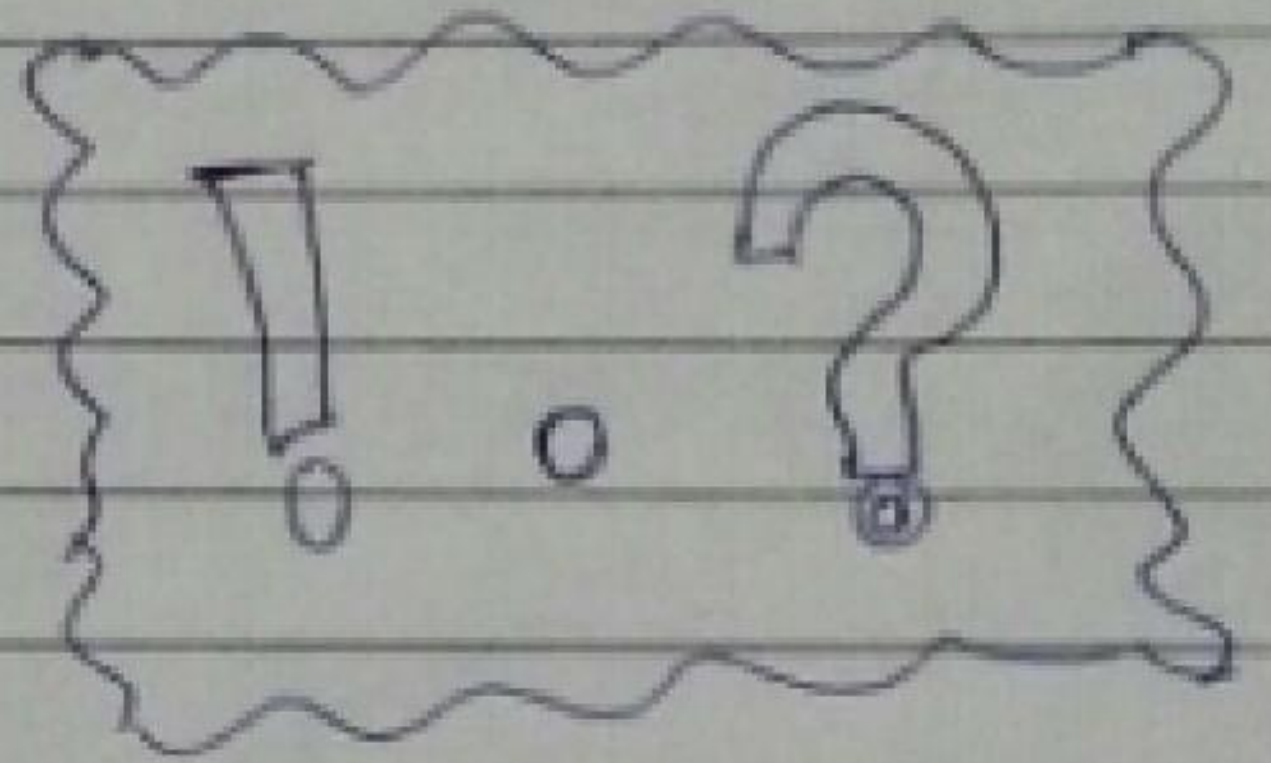
86. Circle the adverbs :-

(1) furiously firmly narrowly

- ② Birds hastily Missed
- ③ Sing Dog Easily
- ④ Actively put Squirrel

Q7. Put correct punctuation marks:-

① What is your name



② I made a cake

③ Wow it is hot today

④ How much longer should we wait

चन्द्र भान मेमोरियल पब्लिक स्कूल
हिन्दी अभ्यासपत्रिका-2
कक्षा - दूसरी

प्र०१ बीमारी की दृष्टि के लिए प्रार्थना पत्र ।

प्र०२ एक से दस तक शब्दों में गिनती लिखो।

1 _____

2 _____

3 _____

4 _____

5 _____

6 _____

7 _____

8 _____

9 _____

10 _____

प्र०३ महौनों के नाम लिखो:-

| |
|--|
| |
| |
| |
| |
| |
| |
| |

| |
|--|
| |
| |
| |
| |
| |
| |
| |

प्र०४ वचन बदलो:-

लड़का - _____

रोटी - _____

बच्चा - _____

चौटी - _____

धोड़ा - _____

कुर्सी - _____

बेटा - _____

लड़की - _____

किताब - _____

बेटी - _____

प्र०५ सर्वनाम किसे कहते हैं? उदाहरण
सहित लिखो?

CHANDER BHAN MEMORIAL PUBLIC SCHOOL

MATHS WORKSHEET - 2

CLASS - IInd

Q-1 Write the short form:-

$$500 + 40 + 2 = \text{[]}$$

$$400 + 00 + 1 = \text{[]}$$

$$900 + 30 + 7 = \text{[]}$$

$$700 + 10 + 3 = \text{[]}$$

$$200 + 20 + 2 = \text{[]}$$

Q-2 Put the sign $<$, $>$, $=$

$$74 \text{ [] } 47$$

$$93 \text{ [] } 94$$






$$100 \text{ [] } 99$$

$$31 \text{ [] } 31$$

$$85 \text{ [] } 22$$

$$77 \text{ [] } 77$$




Ques 3 Write in the numerals:-



- 1) Three hundred twenty four - 
- 2) Two hundred eleven - 
- 3) One hundred forty one - 
- 4) Six hundred thirty two - 
- 5) Nine hundred sixty nine - 



Ques 4 Complete the patterns:-

- | | | | | | |
|----|----|----|---|---|---|
| 2 | 4 | 6 | — | — | — |
| 5 | 10 | 15 | — | — | — |
| 3 | 6 | 9 | — | — | — |
| 10 | 20 | 30 | — | — | — |
| A | B | A | — | — | — |
| 1 | 2 | 3 | — | — | — |

Ques 5 Word problems:-

(a) Ram has 42 Fishes . Shyam has 34 Fishes . How many Fishes  in all together?

(b) There are 60  balls. 5 more balls . How many are there now?

(c) Ana had 18 apples . She gave 5 away. How many apples  did Ana have left?

Name :- _____ CHANDER BHAN MEMORIAL
Roll no :- _____ PUBLIC SCHOOL
Date :- _____ CLASS - II
EVS WORKSHEET - 2

Ques-1 Fill in the blanks :-

- (i) _____ help us to see.
- (ii) _____ is the festival of colours.
- (iii) Trees shed their leaves in _____ season.
- (iv) _____ help us to smell.
- (v) All planets revolve around the _____.

[Hints :- Sun , Autumn , Nose , Eyes , Holi]

Ques-2 Matching :-

- | | |
|------------------------------|-----------------------|
| (i) Independence day | (a) Republic day |
| (ii) Pumpkin | (b) Internal organ |
| (iii) Lungs | (c) Natural Satellite |
| (iv) Earth | (d) National festival |
| (v) 26 th January | (e) creepers |
| (vi) Moon | (f) Planet |

Ques-3 Give Two-Two examples of each :-

- (i) Planets _____ , _____
- (ii) Religious festival _____ , _____
- (iii) Sense organ _____ , _____
- (iv) Internal organ _____ , _____
- (v) Creepers _____ , _____

Ques-4 Write the six seasons :-

(i)

(ii)

(iii)

(iv)

(v)

(vi)

Ques-5 Give answer in one word :-

(i) Which festival is celebrated on 15th August?
_____.

(ii) Which organ help us to walk? _____

(iii) Who have their own light? _____

(iv) Which is the natural satellite of the earth?
_____.

(v) Which is the festival of light?
_____.

Ques-6 State True/False :-

- (i) Trees shed their ^{leaves} in autumn season.
- (ii) Lungs help us to take breathe.
- (iii) Christmas celebrated on 26th January.
- (iv) Heart is an external organ.
- (v) Sun gives us heat and light.

Ques-7 Draw a picture of Traffic light.

CHANDER BHAN MEMORIAL PUBLIC SCHOOL
G.K. WORKSHEET
CLASS - II Ind.

Q1. Name Them :-

- ① I fan out my tail, feathers and dance. _____
- ② I am a black and white bird. I cannot fly but swim very well. _____
- ③ I am a beautiful and colourful bird. I catch fish by diving into water. _____
- ④ I give lessons to students. _____
- ⑤ I am an expert of the laws. _____
- ⑥ I fly aircraft. _____
- ⑦ I am 'king of the jungle'. _____
- ⑧ I am smallest bird in the world. _____

Q2. Write the months for the following festivals :-

- ① Christmas Day _____
- ② Gandhi Jayanti _____

(c) Children's Day _____

(d) Republic Day _____

(e) Mother's Day _____

(f) Teacher's Day _____

(g) Independence Day _____

Q3. Write two examples of each:-

(1) Two most common cereals

W _ _ _ _

R _ _ _

(2) Two plants that give us medicine

N _ _ _

T _ _ _ _

(3) Two beverages which we get from plant

T _ _

C _ _ _ _

(4) Two plants that give us fibre

C _ _ _ _

J _ _ _

CHANDER BHAN MEMORIAL PUBLIC SCHOOL

CLASS - IInd

SUBJECT - COMPUTER

WORKSHEET

NAME:- _____

Roll.No:- _____

Q1 Write the steps to Open WordPad :-

1. _____

2. _____

3. _____

4. _____

Q2 Write any Six Wordpad Tools name :-

1. _____

2. _____

3. _____

4. _____

5. _____

6. _____

Q3 Write any Four Thusepaint tools name :-

1. _____

2. _____

3. _____

4. _____

Q4 Draw Monitor and C.P.U. :-

Monitor

C.P.U.