

NAME: \_\_\_\_\_ CHANDER BHAN MEMORIAL PUBLIC SCHOOL

DATE: \_\_\_\_\_ V \_\_\_\_\_

Roll No: \_\_\_\_\_ SST PRACTICE WORKSHEET

Que:-1 Write the name of seven continents.


1. \_\_\_\_\_ 2. \_\_\_\_\_  
 3. \_\_\_\_\_ 4. \_\_\_\_\_  
 5. \_\_\_\_\_ 6. \_\_\_\_\_ 7. \_\_\_\_\_

Que:-2 Write the name of five oceans.


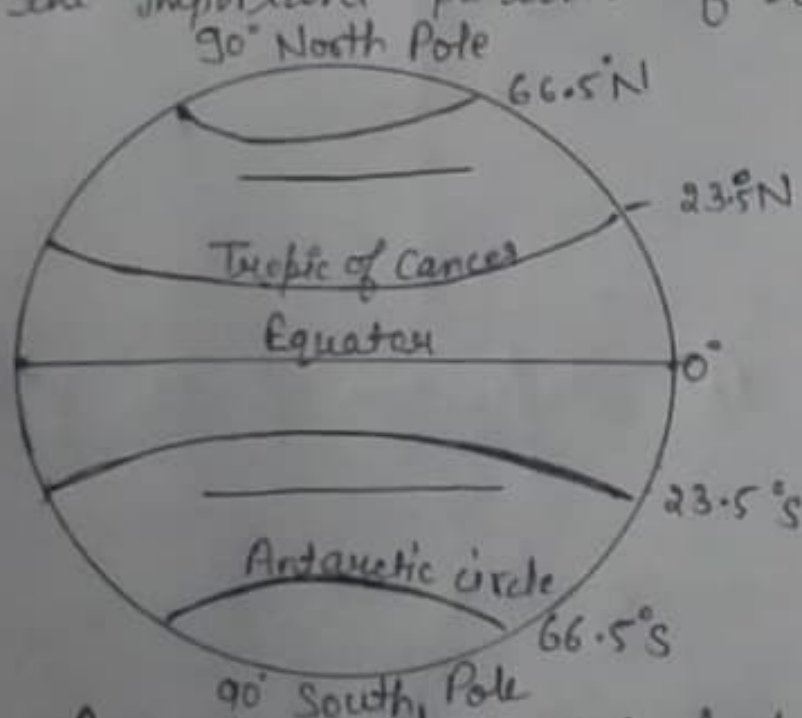
1. \_\_\_\_\_ 2. \_\_\_\_\_ 3. \_\_\_\_\_  
 4. \_\_\_\_\_ 5. \_\_\_\_\_

Que:-3 Draw the symbols for the following:-

① Temple :-



2. Railway line :-

Que:-4 Complete the important parallel of latitude:-

Important parallel of latitude

Que:-5 Fill in the blanks

1. Ramkrishna Mission was founded in \_\_\_\_\_
2. \_\_\_\_\_ is the largest continent on earth.
3. \_\_\_\_\_ ocean takes up about half of the surface of the earth
4. \_\_\_\_\_ continent connected to Asia on the west.
5. \_\_\_\_\_ is the longest line of latitude.

Que:-6 Difference between map and globe.

Globe

Map

Que:-7 Write the definition of the following -

① Poles:- \_\_\_\_\_  
\_\_\_\_\_

② Symbol:- \_\_\_\_\_  
\_\_\_\_\_