

NAME: _____

ROLL No: _____

DATE: _____

V
ENGLISH PRACTICE WORKSHEET

Que:-1 Write a paragraph on 'Value of tree'

Que:-2 Write a letter on full fee concession

Que:-3 Write the english and hindi meaning of the following

- ① Small _____
- ② Pits _____
- ③ Sound _____

Que:-4 fill the following :-


- ① _____ sun rises in the east (article)
- ② The books are _____ the table (preposition)
- ③ Seema is a _____ girl (adjective)

Que:-5 write the define of (noun) -

Que:-6 fill collective noun -

- ① _____ of people
- ② _____ of stars
- ③ _____ of players
- ④ _____ of grapes

Que:-7 Picture composition :-



नाम :- _____

चन्द्र भान मैमोरिसुल पब्लिक स्कूल
कक्षा - पांचवी

रोल नं० :- _____

दिनांक :- _____

हिन्दी अभ्यास पुस्तिका

प्र०:१ 'प्रदूषण' पर एक निबंध लिखो

प्र०:२ अपने मित्र को अपनी बहन की शादी में आमंत्रित करने
के लिए पत्र।

प्र०:३ शब्दांश

- ① उपहार _____
- ② प्रशन्सा _____

दुग्ध _____
 मस्तिस्क _____

प्र०:५ संज्ञा की परिभाषा उदाहरण सहित लिखो:-

प्र०:५ विलोम लिखो

धनी _____
 अभिशाप _____

आदर _____
 अंधेरा _____

प्र०:६ मुहावरों का अर्थ लिखकर वाक्य बनाओ -

- ① आग बधुला होना -
- ② पेट में -पूँह बूदना -

प्र०:७ पर्यायवाची शब्द लिखो -

- ① आग - _____ , _____
- ② जल - _____ , _____

प्र०:८ रिक्त स्थान भरें -

- ① राधा नृत्य _____ (क्रिया)
- ② मेरे पास _____ आता है। (विशेषण)

प्र०:९ निम्न उपसर्ग और प्रत्यय से शब्द बनाओ -

उपसर्ग	प्रत्यय
① उप - _____	ई - _____
② वि - _____	वाला - _____

NAME - CHANDER BHAN MEMORIAL PUBLIC SCHOOL

R. No - CLASS - V

Date - MATHS PRACTICE WORKSHEET

Ques-1 Solve the following :-

$$\begin{array}{r}
 (i) \quad 568324 \\
 \quad 432564 \\
 + \quad 328923 \\
 \hline
 \end{array}$$

$$\begin{array}{r}
 (ii) \quad 893547 \\
 \quad - 523689 \\
 \hline
 \hline
 \end{array}$$

$$\begin{array}{r}
 (iii) \quad 53241 \\
 \quad \times 86 \\
 \hline
 \end{array}$$

$$(iv) \quad 28 \overline{) 568325}$$

Ques-2 Write the following in :-

(i) 9,32,865 (words) -

(ii) 99,909 (words) -

(iii) Nine lakh four hundred Twenty -

(iv) Twenty six crore eight lakh six thousand four hundred two :-

Ques-3 Form the greatest and the smallest number using the digits 6,3,8,7,1. and find the difference.

Sol.

Ques-4 change the following digits in Roman numbers:-

(i) 56 -

(ii) 98 -

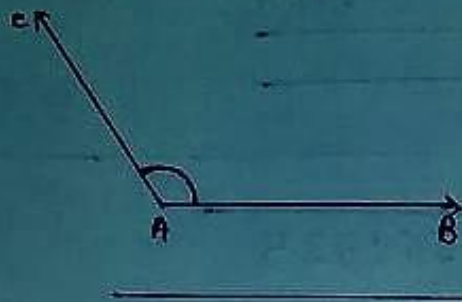
Ques-5 change the following Roman numbers in to digits:-

(i) XXXVIII -

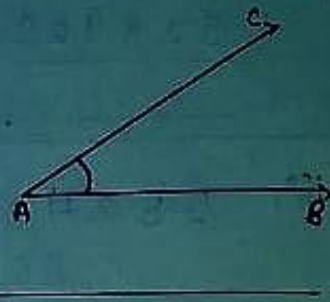
(ii) LXVII -

Ques-6 Label each angle as 'acute', obtuse OR right

(i)



(ii)



Ques-7 Round off these numbers to the:-

(i) 93 (Nearest ten) - _____

(iii) 17287 (Nearest thousand) - _____

(ii) 1375 (Nearest hundred) - _____

(iv) 549372 (Nearest lakh) - _____

Ques-8 Solve the following word problems:-

(i) The Cost of a chair is ₹ 315. find the Cost of 27 Such chairs.

(ii) A milk dairy produces 25,545 litres of milk every day. it Supplies 15,625 litres of milk to a milk-depot and rest to the market. How much milk is supplied to the market?

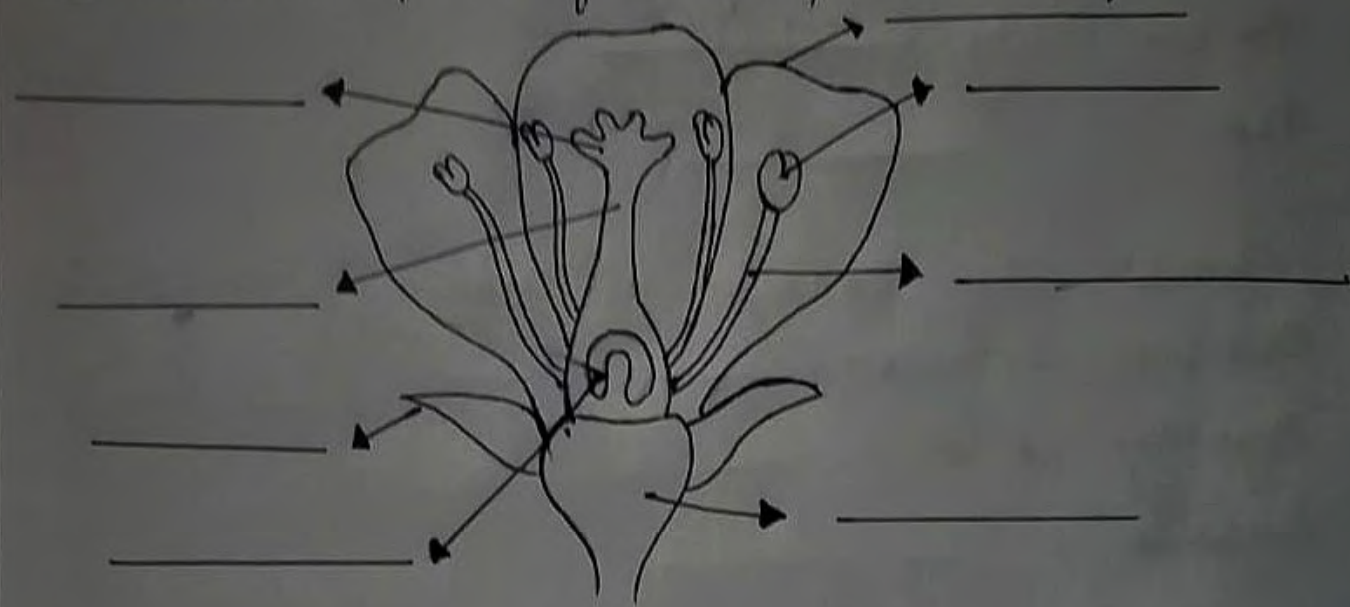
Sol.

NAME: _____ CHANDER BHAN MEMORIAL PUBLIC SCHOOL

Roll No.: _____ V _____

DATE: _____ SCIENCE PRACTICE WORKSHEET

Que: 1 Name the parts of the reproductive flower plant.



Que: 2 Write the difference between kharif and Rabi crops

kharif crops

Rabi crops



Que: 3 Write the defines:-

① Agriculture:-

② Herbivores:-

Que:4 Write the names of the breathing organs of the following animals:-

- ① Caterpillar _____
- ② Human being _____
- ③ Fish _____

Que:5 Write the example of each:-

- ① Herbivores animals :- _____
- ② Migratory bird :- _____
- ③ Parasite :- _____

Que:6 Write few lines about them:-

- ① Reptiles:- _____

- ② Pollination:- _____

Que:7 Draw the picture of omnivores animal and colour it.

Name - CHANDER BHAN MEMORIAL PUBLIC SCHOOLR. No - CLASS - VDate - ONK - PRACTICE WORKSHEET

Que-1 Answers the following questions:-

(i) Which Country to launch a Cosmic Space Rocket towards moon?

Ans -

(ii) Write the first Scientific Satellite of India?

Ans -

(iii) How many types of taxes will be in Indian GST?

Ans -

(iv) Write the name of first Indian woman to go in to space?

Ans -

(v) Name of the disease that is causing the 2019 Novel Coronavirus outbreak?

Ans -

Que-2 Fill in the blanks:-

(i) _____ flows through the Capital of India.

(ii) On _____ the ministry of tourism had launched "Stranded in India".

(iii) In _____ year UN was established.

(iv) Trees give _____ to the passerby.

(v) we use _____ to make our food delicious.

Que-3 Name them:-

(i) Corbett National park situated in _____

(ii) The first case of novel coronavirus was identified in _____

(iii) The first Indian woman to reach final in olympics _____

(iv) The venue for 2020 olympics _____

(v) The founder of Jainism _____

Ques-4 write the full form of following :-

(i) WHO -

(ii) UN -

(iii) BHIM -

Ques-5 write the name of the following :- [of India]

(i) Home Minister _____ (ii) Railway Minister _____

(iii) Education Minister _____ (iv) Health Minister _____

Ques-6 write four freedom fighters name :-

(i) _____ (iii) _____

(ii) _____ (iv) _____

Ques-7 write the inventors name according to their inventions :-

(i) Telephone _____ (iii) Dynamite _____

(ii) Computer _____ (iv) Printing press _____

Ques-8 write the cities name where these stadiums are located?

(i) Eden Gardens _____ (iii) Jawahar Lal Nehru Stadium _____

(ii) Wankhede Stadium _____ (iv) Holkar Stadium _____

Ques-9 what are the mild symptoms of novel coronavirus?

Ans -